

Name \_\_\_\_\_

Date \_\_\_\_\_

Year Group \_\_\_\_\_

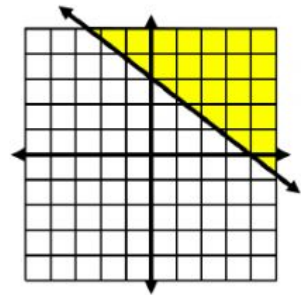
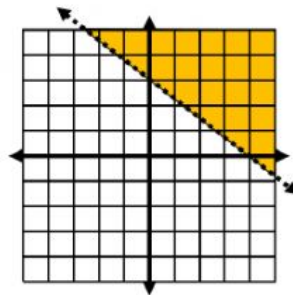
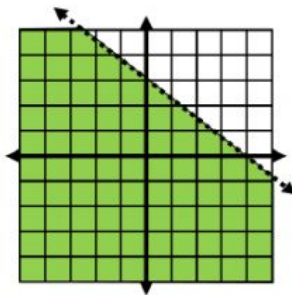
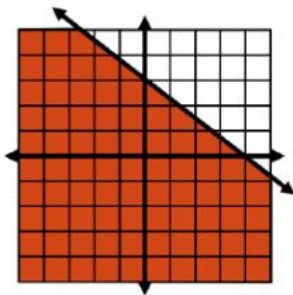
**Graph the inequality**

**Please graph using the x-intercept and y-intercept**

1.  $3x + 4y < 12$     ●    ●    ○    ○

Extra Circles

\_\_\_\_\_  
\_\_\_\_\_

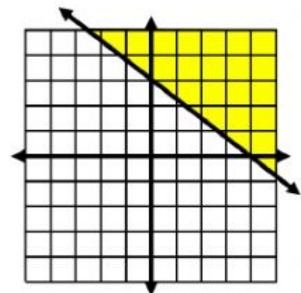
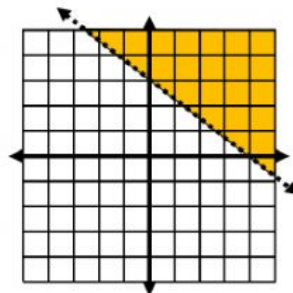
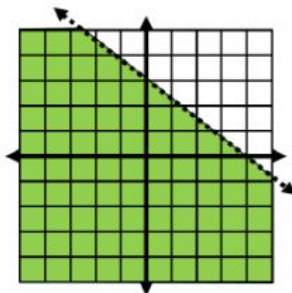
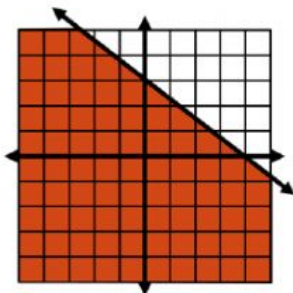


**Please graph using the x-intercept and y-intercept**

2.  $3x + 4y \geq 12$     ●    ●    ○    ○

Extra Circles

\_\_\_\_\_  
\_\_\_\_\_



**Please put the pieces on top of the graph so that it forms the inequality below**

3.  $2x - 2y > 4$

Extra Pieces

