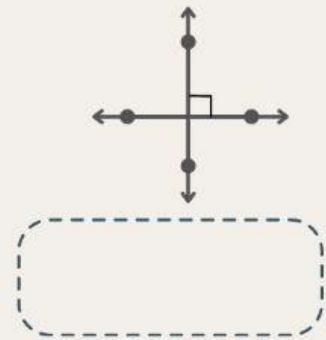
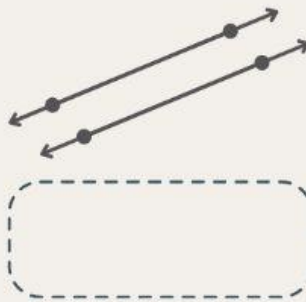
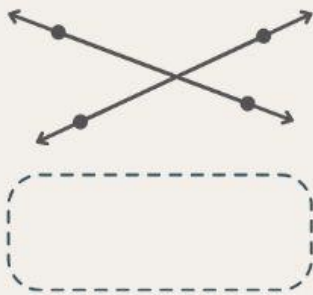
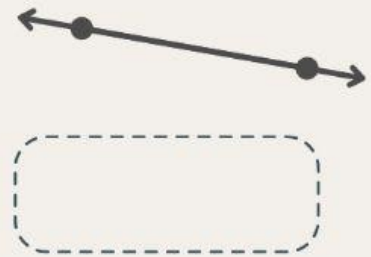
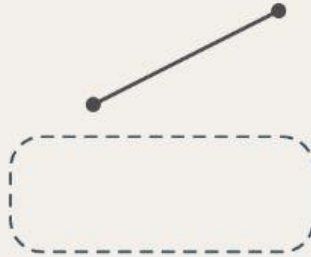


Points, Lines, and Line Segments

Select the right option for each figure.



Match the symbols to their corresponding definitions

\overleftrightarrow{CD}

line CD or line DC

$\overline{CD} \parallel \overline{AB}$

line segment CD or
line segment DC

\overline{CD}

line CD is perpendicular
to line AB

$\overline{CD} \perp \overline{AB}$

line CD is parallel
to line AB