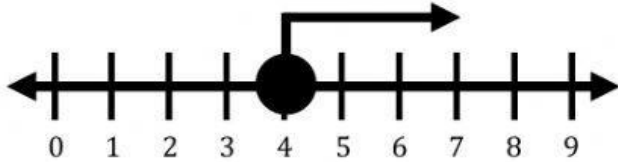


Name _____

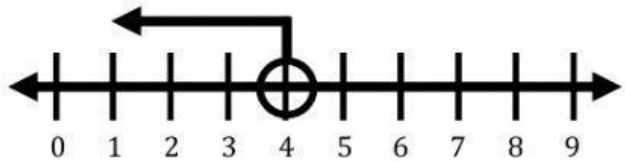
Date _____

Year Group _____

Match the following inequalities to their graphs



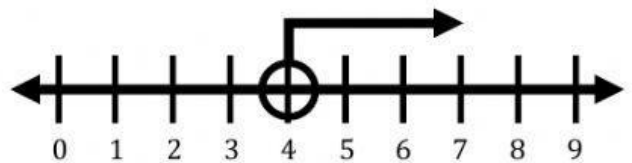
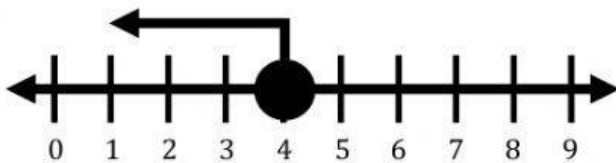
1. $x < 4$



2. $x \leq 4$

3. $x \geq 4$

4. $x > 4$



Graph for the inequalities on a number line.

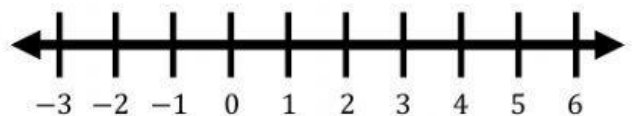
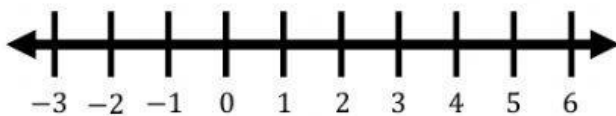
Please drag the correct pieces on the number line to graph.

Put the arrows on top of the tick marks.



5. $x > 2$

6. $x \geq -2$



7. $x \leq 0$

8. $x < 1$

