

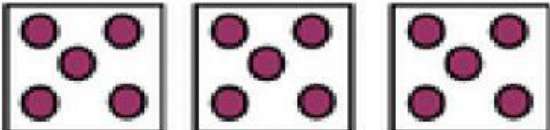


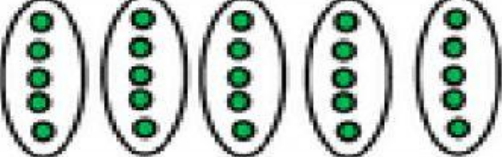



Write a multiplication sentence for the following.

	<p>___ groups of ___ = ___</p> <p>___ x ___ = ___</p>
	<p>___ groups of ___ = ___</p> <p>___ x ___ = ___</p>
	<p>___ groups of ___ = ___</p> <p>___ x ___ = ___</p>
	<p>___ groups of ___ = ___</p> <p>___ x ___ = ___</p>
	<p>___ groups of ___ = ___</p> <p>___ x ___ = ___</p>
	<p>___ groups of ___ = ___</p> <p>___ x ___ = ___</p>
	<p>___ groups of ___ = ___</p> <p>___ x ___ = ___</p>