

Name:.....

Date: 7th April 2022

Year: 6

ICT Assessment

Section A.

Choose the correct answer.

1. What is the colour for motion blocks?



2. What is the function of this block?



3. What is the function of this block?








4. A that will never end unless the Stop Sign is pressed or the script is stopped.



5. Plays a without pausing the script.

Section B

Choose 'TRUE' if the statement is correct. Choose 'FALSE' if the statement is wrong.

	If touching the edge of the screen, the sprite's direction flips	
	A thought bubble appears over the sprite and stays for the specified amount of time.	
	Changes the volume by the amount.	
	When the sprite is clicked, the script activates.	
	Pauses the script until the condition is true.	

