
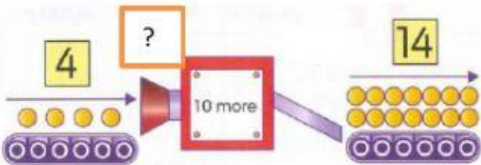
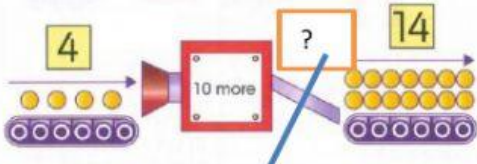






MATHS

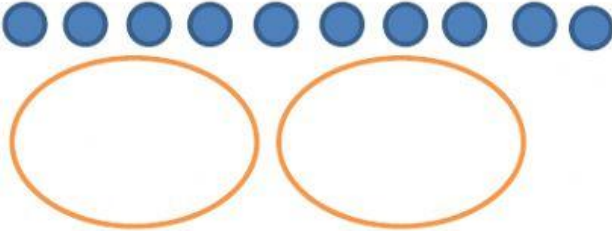



A. VOCABULARY

<p>1. What symbol is this?</p> <p>8 ↓ 2 = 6</p> <p>a. Addition b. Subtraction</p>	<p>2. What symbol is this?</p> <p>x 2</p> <p>a. Equal b. double</p>
<p>3. Number 9 and 11 are:</p> <p>9 & 11</p> <p>a. Near ten b. Number pair to ten</p>	<p>4. What shape is this?</p>  <p>a. Triangle b. Rectangle</p>
<p>5. What is this?</p>  <p>a. Input b. Output</p>	<p>6. What is this?</p>  <p>a. input b. output</p>
<p>7. What shape is this?</p> <p>a. Diamond b. square</p> 	<p>8. What is this symbol?</p> <p>a. Half b. double</p> 
<p>9. What is this?</p>  <p>a. Line b. shape</p>	<p>10. What shape is it?</p>  <p>a. Cuboid b. Triangle</p>

B. APPLICATION

<p>11. What number is double 6?</p> <p>Double 6 = ?</p>	<p>12. What numbers are near double 6:</p> <p>Near double 6 = ?</p>
--	--

MATHS

<p>a. 6 b.8 c.10 d.12</p>	<p>a. 3 and 6 b.4 and 6 c. 11 and 13 d. 9 and 12</p>
<p>13. What number is half of 10?</p>  <p>a. 2 b.3 c.5 d. 6</p>	<p>14. Draw a line to divide shape into halves.</p> 
<p>15. Draw a line to divide thing into halves.</p> 	<p>16. Check this subtraction. Circle Yes or No.</p> <div style="border: 1px solid black; background-color: #800000; color: white; padding: 10px; text-align: center;"> $27 - 5 = 12$ </div> <p>a. Yes b. No</p>
<p>17. Check this subtraction. Circle Yes or No.</p> <div style="border: 1px solid black; background-color: #4682B4; color: white; padding: 10px; text-align: center;"> $15 - 9 = 6$ </div> <p>a. Yes b. No</p> <p>19. Fill in the missing number:</p> <div style="display: flex; align-items: center; justify-content: center;"> <div style="border: 2px solid orange; width: 50px; height: 50px; margin-right: 10px;"></div> <div style="font-size: 2em; margin: 0 10px;">+ 8 = 25</div> </div>	<p>18. Fill in the missing number.</p> <div style="display: flex; align-items: center; justify-content: center; font-size: 2em;"> 8 + <div style="border: 2px solid orange; width: 50px; height: 50px; margin: 0 10px;"></div> = 15 </div> <p>20. There are 5 crayons. How many more to make near ten?</p>  <p style="text-align: right;">a. 5 & 7 b. 4 & 6 c. 6 & 7</p>