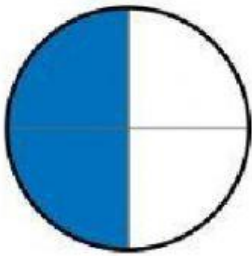



# Fraction Shapes


Write the fraction for the shaded area of each shape.



\_\_\_\_\_



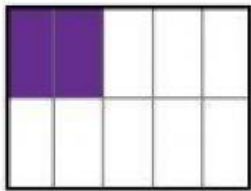
\_\_\_\_\_



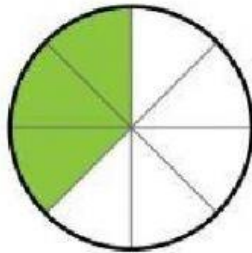
\_\_\_\_\_




\_\_\_\_\_




\_\_\_\_\_



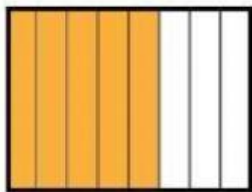
\_\_\_\_\_




\_\_\_\_\_



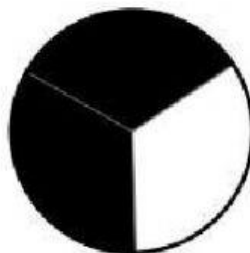
\_\_\_\_\_




\_\_\_\_\_



\_\_\_\_\_



\_\_\_\_\_



\_\_\_\_\_

لائم بين الكسر واسمه بالكلمات

تسعان

أربعة أخماس

ثلث

ثلاثة أرباع

ثلاثة أسباع

خمسان

سبعة أثمان

سُدس

$$\frac{2}{5}$$

$$\frac{7}{8}$$

$$\frac{3}{4}$$

$$\frac{2}{9}$$

$$\frac{1}{6}$$

$$\frac{3}{7}$$

$$\frac{4}{5}$$

$$\frac{1}{3}$$

لكل كسر، اكتب المقام فقط في المكان الصحيح

(1).  $\frac{2}{3}$

(2).  $\frac{3}{4}$

(3).  $\frac{5}{6}$

(4).  $\frac{4}{5}$

لكل كسر، اكتب البسط فقط في المكان الصحيح

(1).  $\frac{3}{8}$

(2).  $\frac{7}{10}$

(3).  $\frac{5}{7}$

(4).  $\frac{6}{9}$