

## Guided Practice Worksheet

Name: \_\_\_\_\_ Date: \_\_\_\_\_

### WHAT IS MY VALUE ?

Write the value of each number

Example:

Hundreds	Tens	Ones
4	2	5
400	20	5

1.

Hundreds	Tens	Ones
5	1	7
500		7

2.

Hundreds	Tens	Ones
6	3	2
	30	

3.

Hundreds	Tens	Ones
2	6	1
200		

4.

Hundreds	Tens	Ones
8	0	3
	0	3

## Independent Practice Worksheet

NUMBERS TO 1000 [PLACE VALUE] | Level 7-6


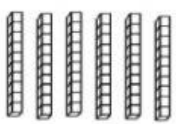

Name: \_\_\_\_\_ Date: \_\_\_\_\_

Marks
10

### WHERE IS MY PLACE?

Count the Thousands, Hundreds, Tens and Ones. Then write the place of the number.

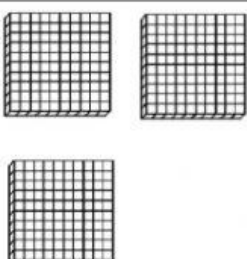


1)

Hundreds	Tens	Ones
		

Hundreds  Tens  Ones

The digit **4** is in the \_\_\_\_\_ place.




2)

Hundreds	Tens	Ones
		

Hundreds  Tens  Ones

The digit **8** is in the \_\_\_\_\_ place.

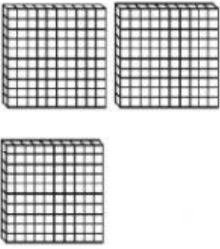


3)

Hundreds	Tens	Ones
		

Hundreds  Tens  Ones

The digit **6** is in the \_\_\_\_\_ place.




4)

Hundreds	Tens	Ones
		

Hundreds  Tens  Ones

The digit **3** is in the \_\_\_\_\_ place.

5)

Hundreds	Tens	Ones
		

Hundreds
  Tens
  Ones

The digit **7** is in the \_\_\_\_\_ place.

Name: \_\_\_\_\_ Date: \_\_\_\_\_

## Place Value

Marks
10

Fill in the blanks.

a. In 823, the digit **2** is in the \_\_\_\_\_ place.

The **value** of digit **2** is \_\_\_\_\_.

b. In 823, the digit **8** is in the \_\_\_\_\_ place.

The **value** of digit **8** is \_\_\_\_\_.

c. In 823, the digit **3** is in the \_\_\_\_\_ place.

The **value** of digit **3** is \_\_\_\_\_.

d. In 723, the digit **7** is in the \_\_\_\_\_ place.

The **value** of digit **7** is \_\_\_\_\_.

e. In 923, the digit **9** is in the \_\_\_\_\_ place.

The **value** of digit **9** is \_\_\_\_\_.

f. In 135, the digit **5** is in the \_\_\_\_\_ place.

The **value** of digit **5** is \_\_\_\_\_.

g. In 427, the digit **7** is in the \_\_\_\_\_ place.

The **value** of digit **7** is \_\_\_\_\_.

h. In 693, the digit **9** is in the \_\_\_\_\_ place.

The **value** of digit **9** is \_\_\_\_\_.

i. In 813, the digit **1** is in the \_\_\_\_\_ place.

The **value** of digit **1** is \_\_\_\_\_.

j. In 483, the digit **4** is in the \_\_\_\_\_ place.

The **value** of digit **4** is \_\_\_\_\_.

Exit Ticket

# EXIT TICKET

Level 7-6

Name: .....

Place value

## Place Value

Fill in the blank with correct answer.

Place	Hundreds	Tens	Ones
Number	4	2	5
Value			