

## FUNCIONES LINEALES

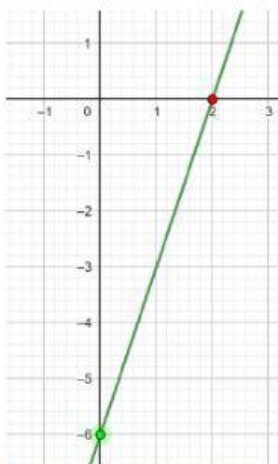
Número de lista: \_\_\_\_\_

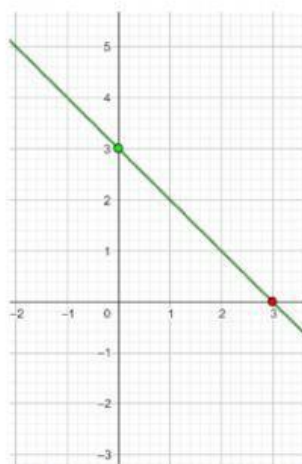
### Matemáticas IV

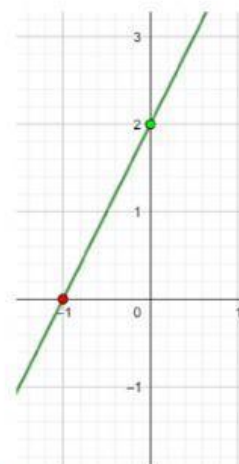
Nombre: \_\_\_\_\_ Grupo: \_\_\_\_\_

Arrastra cada función y colócala debajo de su gráfica correspondiente.

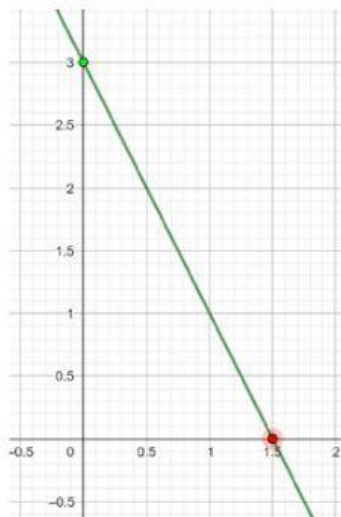
$f(x) = 2x + 2$	$f(x) = 3x - 6$	$f(x) = -x + 3$
-----------------	-----------------	-----------------

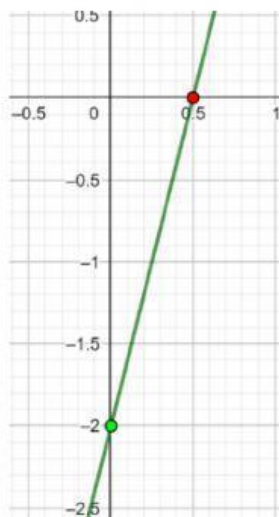


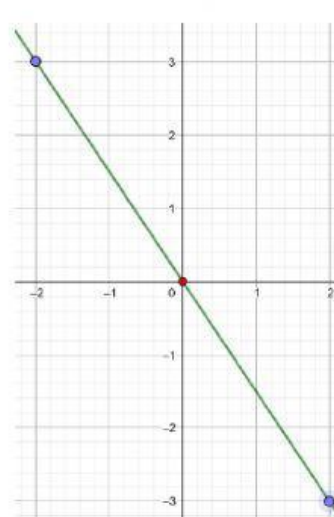





$f(x) = 4x - 2$	$f(x) = \frac{3}{2}x$	$f(x) = -2x + 3$
-----------------	-----------------------	------------------








GOOD LUCK!!!