

Name: \_\_\_\_\_  
Class: \_\_\_\_\_

Teacher: Tra My TRAN

## LISTENING PRACTICE





### Time

#### 1. Getting Ready

##### Task 1


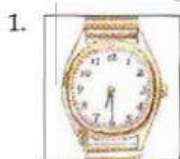
Match each time with a picture. Write the number.

1. twenty to two
2. three fifteen
3. ten after ten
4. two twenty
5. three fifty-five
6. six forty-five
7. two o'clock
8. five past ten



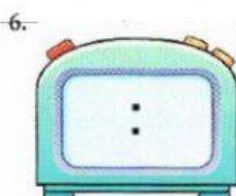
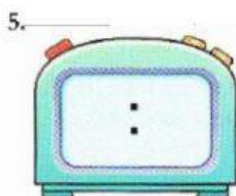
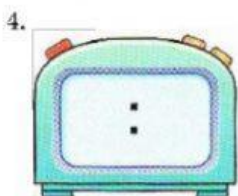
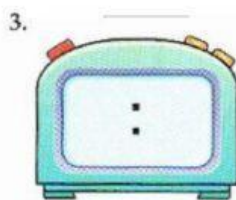
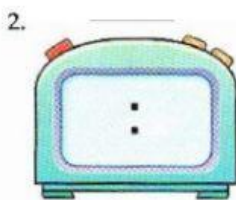

##### Task 2

Can you say these times?



#### 2. Let's Listen

Listen and write the correct time on each clock.



### 3. Let's Listen

#### Task 1

Listen to these radio announcements. Circle the correct time.



- |             |             |            |            |
|-------------|-------------|------------|------------|
| 1. a. 7:50  | 3. a. 1:59  | 5. a. 6:55 | 7. a. 9:30 |
| b. 7:15     | b. 2:05     | b. 6:15    | b. 9:13    |
| 2. a. 10:45 | 4. a. 11:10 | 6. a. 1:40 | 8. a. 5:55 |
| b. 10:05    | b. 11:02    | b. 1:14    | b. 5:05    |

#### Task 2


Listen again and circle the correct radio station.

- |             |             |            |            |
|-------------|-------------|------------|------------|
| 1. a. 19.9  | 3. a. 698.9 | 5. a. NBC  | 7. a. 1010 |
| b. 90.9     | b. X98.5    | b. BBC     | b. 1001    |
| c. 99.9     | c. H98.5    | c. BBD     | c. 99.30   |
| 2. a. 10.05 | 4. a. WXYZ  | 6. a. WQXR | 8. a. KCBB |
| b. 109.1    | b. WWYZ     | b. W2XR    | b. KABC    |
| c. 105.1    | c. UXYZ     | c. W26R    | c. QABC    |

## 4. Let's Listen

### Task 1

People are calling about show times for movies. Listen and write the show times you hear.



1.

Times
3:40

2.

Times

3.

Times

4.

Times

### Task 2

Listen again. Write the times.

1. The box office opens at \_\_\_\_\_.
2. The coffee bar is open from \_\_\_\_\_ to \_\_\_\_\_.
3. The sneak preview begins at \_\_\_\_\_.
4. The box office closes at \_\_\_\_\_.



## Over to You: What time is it in...?

### Task 2

Look at the time in each city.



New York / 8 a.m. / Friday



Paris / 2 p.m. / Friday



Tokyo / 10 p.m. / Friday

What is the time difference between the cities? Write the correct number.

1. New York and Paris? \_\_\_\_ hours
2. Paris and Tokyo? \_\_\_\_ hours
3. New York and Tokyo? \_\_\_\_ hours

### Task 2

Work in pairs. Take turns asking about times in New York, Paris, and Tokyo. Write the answers in the charts.

Example: A: It's 8 a.m. on Friday in New York. What time is it in Paris?

B: It's 2 p.m. on Friday.

A: So what time is it in Tokyo?

B: It's 10 p.m. on Friday.

New York	Paris	Tokyo
8 a.m. Friday	2 p.m. Friday	10 p.m. Friday
	2 p.m. Saturday	
		7 p.m. Sunday
5 p.m. Monday		
12 p.m. Tuesday		