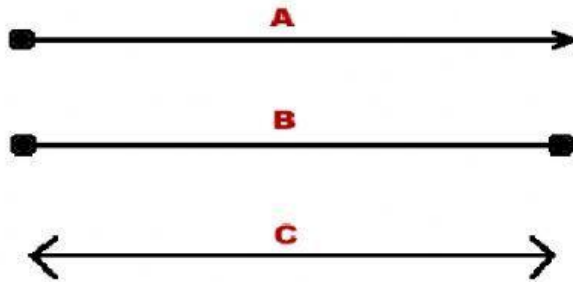


NAME: \_\_\_\_\_

DATE: \_\_\_\_\_

1. One end of a \_\_\_\_\_ goes on for infinity.

- A. line
- B. ray
- C. line segment



2. Letter "A" represents a ....


- A. line segment
- B. line
- C. ray

3. A \_\_\_\_\_ has no endpoints.

- A. line
- B. line segment
- C. ray

NAME: \_\_\_\_\_

DATE: \_\_\_\_\_



4. JK is a \_\_\_\_\_

- A. line segment
- B. ray
- C. line

5. A \_\_\_\_\_ has two endpoints.

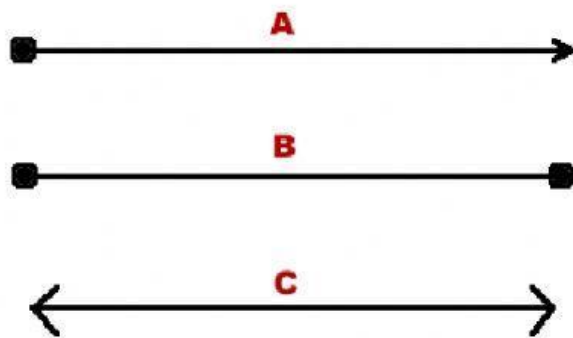
- A. Ray
- B. Line
- C. Line Segment

6. A \_\_\_\_\_ goes on for infinity.

- A. ? line
- B. ? line segment
- C. ? ray

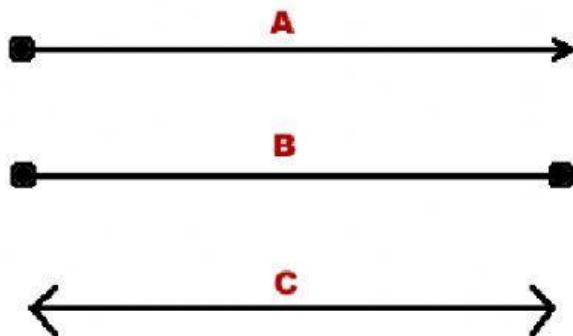
NAME: \_\_\_\_\_

DATE: \_\_\_\_\_



7. Letter "B" represents a ....

- A. ? line segment
- B. ? ray
- C. ? line




8. Letter "C" represents a ....

- A. ? line
- B. ? ray
- C. ? line segment

NAME: \_\_\_\_\_

DATE: \_\_\_\_\_



9. CD is a ....

- A. ? ray
- B. ? line segment
- C. ? line

10. A \_\_\_\_\_ has one endpoint.


- A. ? ray
- B. ? line segment
- C. ? line

11. Both ends of a \_\_\_\_\_ go on for infinity.

- A. ? line segment
- B. ? line
- C. ? ray

NAME: \_\_\_\_\_

DATE: \_\_\_\_\_



12.  
AB is a .....

- A. ? Line Segment
- B. ? Ray
- C. ? Line