



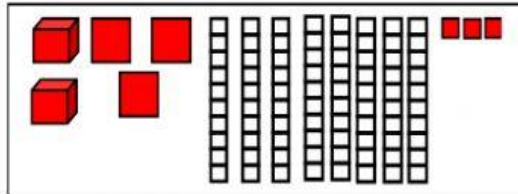
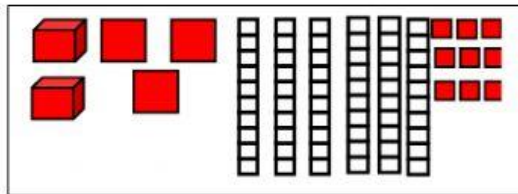
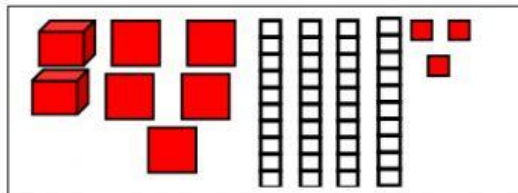
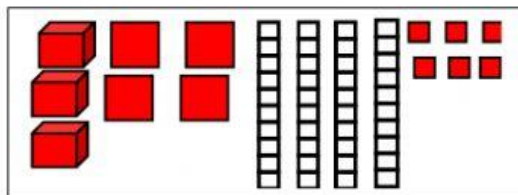
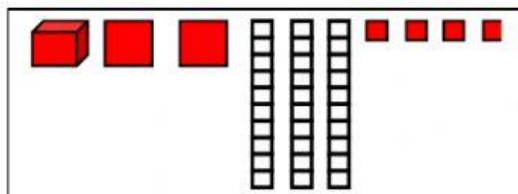
Name -

Phase 1- Foundation Numeracy
Class Worksheet -5

Stage-	Proficient	Grade-	3
Conceptual Area -	Operations on Number System	Topic-	Addition of 3 digit and 4 digit numbers

A. Match the following block representation to the Number:

Block Representation



Number

2369

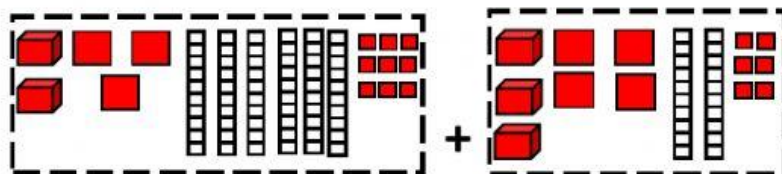
2383

1234

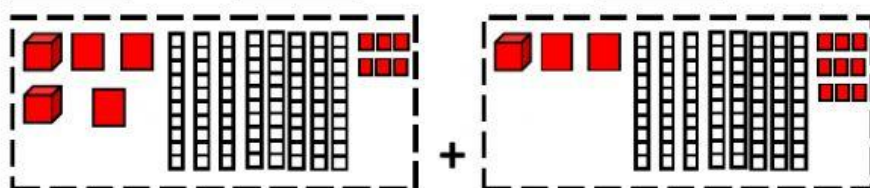
3446

2543

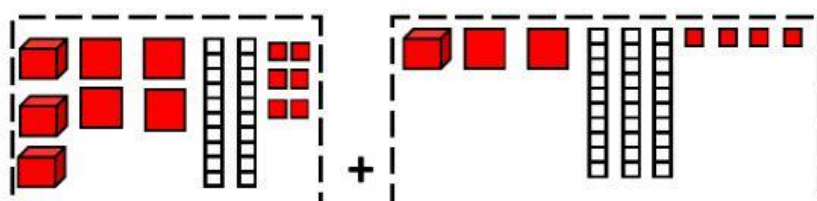
B. Add the following 4 digit numbers by block addition method



$$\boxed{2369} + \boxed{3426} = \boxed{}$$



$$\boxed{2386} + \boxed{} = \boxed{}$$



$$\boxed{} + \boxed{} = \boxed{}$$

C. Add

Th	H	T	U
2	3	39	
+	3	3	4 2
<hr/>			
<hr/>			

Th	H	T	U
4	5	2	8
+	3	7	6 7
<hr/>			
<hr/>			

Th	H	T	U
1	7	29	
+	3	3	4 5
<hr/>			
<hr/>			