


Practice 4 Multiplying 9: Skip-counting


1. Look at the pictures.
Fill in the blanks.



$$1 \times 9 = \underline{\hspace{2cm}}$$

Multiply 9 by 1.


$$9 \times 1 = \underline{\hspace{2cm}}$$



$$5 \times 9 = \underline{\hspace{2cm}}$$

Multiply 9 by 5.

$$9 \times 5 = \underline{\hspace{2cm}}$$



$$9 \times 9 = \underline{\hspace{2cm}}$$

Multiply 9 by 9.

$$9 \times 9 = \underline{\hspace{2cm}}$$

