

**MATH DIAGNOSTIC TEST
FOR GRADE 3**

Name: _____

I. Write the letter of the correct answer in the space provided before each blank.

_____ 1. What is the correct number symbol for eight hundred ninety-nine?

- a. 890
- b. 898
- c. 899

_____ 2. How many hundreds are there in 8,940?

- a. 4
- b. 8
- c. 9

_____ 3. Which among the set of numbers is ordered from least to greatest?

- a. 98, 610, 430
- b. 112, 213, 98
- c. 610, 712, 811

_____ 4. What is 219 increased by 359?

- a. 478
- b. 578
- c. 587

_____ 5. What is 36 less than 50?

- a. 14

- b. 24
- c. 86

_____ 6. Marlon saved ₱150.00 this year. His brother saved ₱200.00 this year. How much did they save together?

- a. ₱250.00
- b. ₱305.00
- c. ₱350.00

_____ 7. Matt has ₱890.00. He bought a pair of shoes for ₱350.00. How much of Matt's money is left?

- a. ₱535.00
- b. ₱540.00
- c. ₱550.00

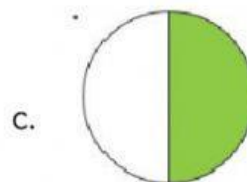
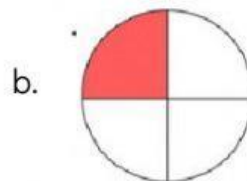
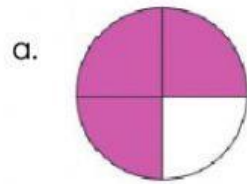
_____ 8. Miguel had a party. Eight children were at the party. If each one got two balloons, how many balloons did the children have altogether?

- a. 10
- b. 16
- c. 18

_____ 9. If 18 apples will be divided into 6 groups, how many apples will each group get?

- a. 3
- b. 4
- c. 5

_____ 10. Ana ate $\frac{1}{4}$ of a pie. Which colored area shows the fraction of what she ate?




_____ 11. Look at the number pattern below.

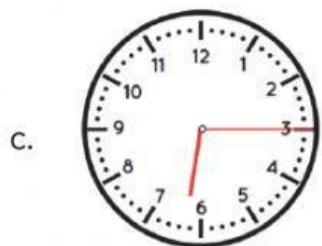
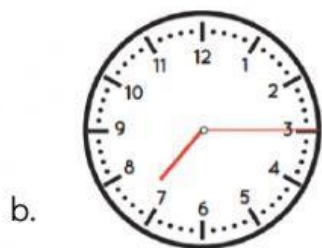
10 20 30 40

Which number comes next?

- a. 60
- b. 45
- c. 50

_____ 12. Which clock shows 6:15?









_____ 13. Sarah started on her homework at 3:00. She worked for 1 hour and 30 minutes. What time did she finish?

- a. 4:20
- b. 5:20
- c. 4:30

Use the graph below to answer the question.

Christmas Gifts	
Name	Number of Gifts
Steven	
Gloria	
Andrew	
Jessica	



_____ 14. How many gifts did Gloria get last Christmas?

- a. 6
- b. 12
- c. 14

_____ 15. How many more gifts does Jessica have than Steven?

- a. 1
- b. 2
- c. 4