

Reading Homework:

Which word is correctly divided into its root word and affix/affixes?

- | | |
|------------------|-----------------|
| A. haunt/ed | D. de/cora/tion |
| B. fright/ening | E. fe/ar/ful |
| C. disapp/ear/ed | |

Which word belongs in this thesaurus entry?

shriek (v): 1. yelp 2. _____

- | | |
|-----------|------------|
| A. scream | C. whisper |
| B. giggle | D. speak |

Writing Homework:

Directions: Write a five sentence paragraph describing your favorite thing to do at recess.

Math Homework:

1. Which shows these fractions ordered from least to greatest.

$$\frac{5}{9}, \frac{9}{8}, \frac{5}{6}$$

a. $\frac{5}{6}, \frac{9}{8}, \frac{5}{9}$

b. $\frac{5}{9}, \frac{5}{6}, \frac{9}{8}$

c. $\frac{5}{6}, \frac{5}{9}, \frac{9}{8}$

d. $\frac{9}{8}, \frac{5}{6}, \frac{5}{9}$

2. Solve for the difference of $3\frac{4}{5}$ and $2\frac{1}{2}$. *Remember all answers must be in simplest form - look at your notes*

a. $1\frac{3}{10}$

b. $1\frac{5}{10}$

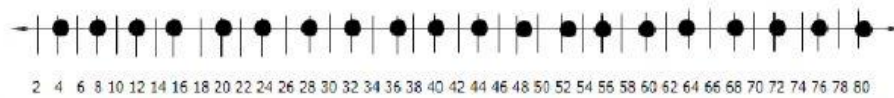
c. $1\frac{3}{3}$

d. $1\frac{7}{10}$

3. Which measurements are equivalent to 32 pints? (Use your foldable in your math notebook)

8 gallons	16 quarts
4 gallons	8 quarts

4. Dashawn is using an 'add four' rule to mark points in a pattern on his number line.



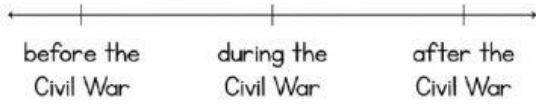
Using the same rule, what will be the next two numbers in which a dot will be placed on the number line?

a. 82, 84	b. 84, 86
c. 84, 88	d. 82, 86

Virginia Studies Homework:

Reconstruction




When did Reconstruction take place?



© All rights reserved.

Reconstruction

What did the Freedmen's Bureau provide to freed African Americans and others in Virginia?

		
housing	medical care	money
		
food	farmland	public schools

© Alynco Teachers

Science Homework:

Plant & Animal Structures

Green plants need
a place to live, light,
air, nutrients, and

_____.



1

Plant & Animal Structures

Green plants make
their own food during
the process of

_____.



5