

Vārds

uzvārds

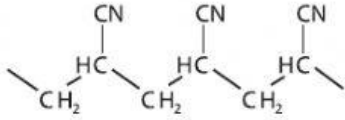
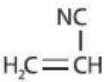
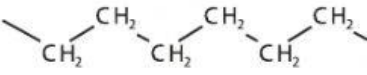
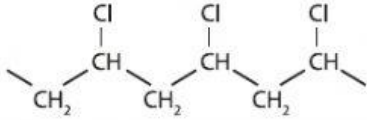
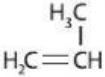
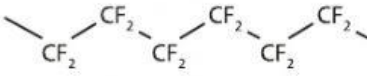
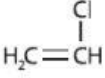
klase

datums

POLIMERIZĀCIJAS REAKCIJAS

1. uzdevums

Savieno tabulā dotos monomērus ar tiem atbilstošiem polimēriem!

Monomēra formula	Polimēra formula
$F_2C=CF_2$	
	
$H_2C=CH_2$	
	
	

2. uzdevums

Sastādi polimerizācijas reakciju vienādojumus! Katra polimēra formulā iekrāso elementārposmu!