




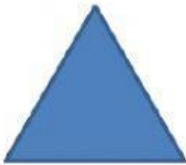
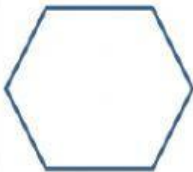


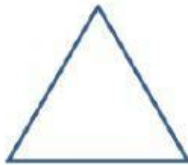



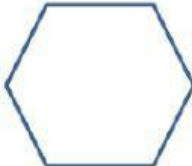









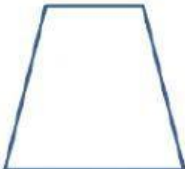





| | | | |
|---|----------|--------|--|
| Name - | | | |
| Phase 1- Foundation Numeracy Class Worksheet -34 | | | |
| Stage- | Beginner | Grade- | 1 |
| Conceptual Area - | Geometry | Topic- | Spatial understanding (2 D Shapes, 3D shapes, Straight Line, Curved Line, Plain and Curved Surfaces) |

A. Shade the shape that matches the first one in the row

| | | | | |
|---|---|---|--|---|
|  |  |  |  |  |
|  |  |  |  |  |
|  |  |  |  |  |
|  |  |  |  |  |
|  |  |  |  |  |


B. Colour the shapes according to the colour code and count them



RED



GREEN



YELLOW



BLUE

