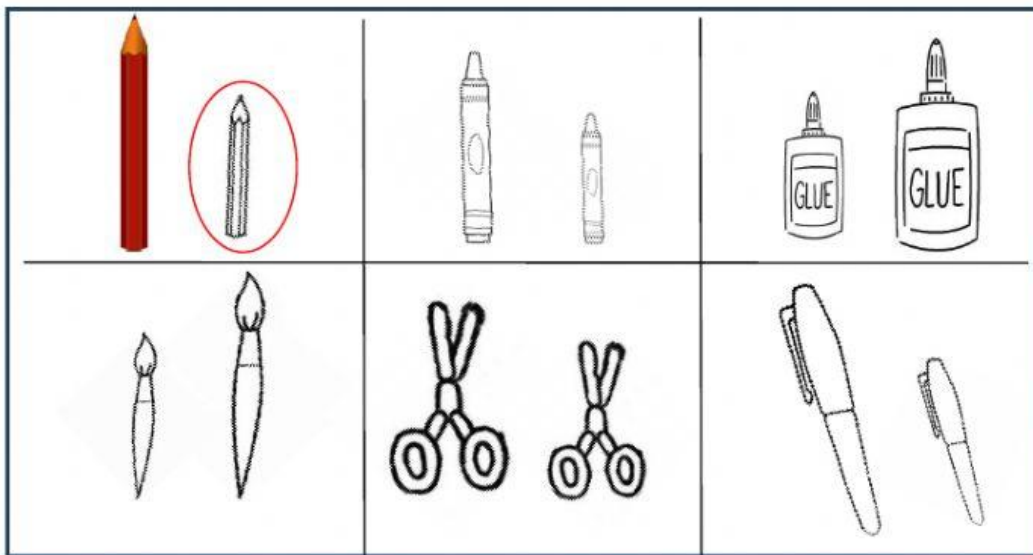




Name -			
Phase 1- Foundation Numeracy Class Worksheet -24			
Stage-	Beginner	Grade-	1
Conceptual Area -	Measurement	Topic-	Comparing and measuring length


A. Look at the pictures. Colour the long picture and circle the short one.




B. Draw a tree **taller** than the one given below.




C. Draw a glass **shorter** than the one given below.




D. Draw a pencil longer than the given pencil.



E. Colour the **tallest animal yellow** and **shortest animal green**. Then fill in the blanks given below.




HORSE



GIRAFFE



SQUIRREL



SHEEP

- _____ is the tallest animal.
- _____ is the shortest animal.
- Which is taller? Horse or Sheep _____ is taller.
- Which is shorter? Squirrel or Sheep. _____ is shorter.
- The horse is taller than _____ and _____.
- The squirrel is shorter than _____ and _____.