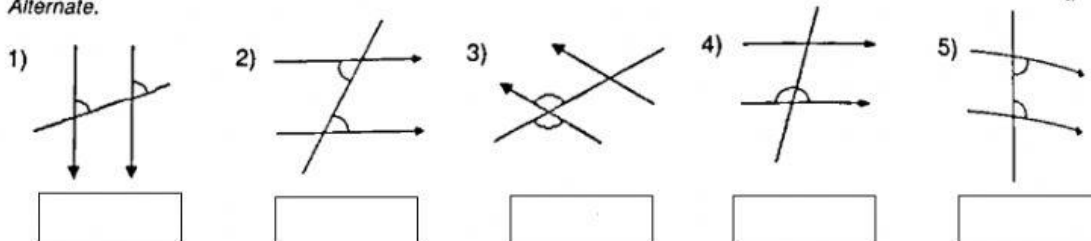
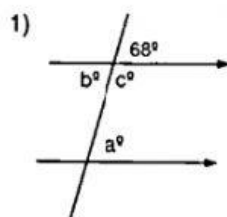


A. Identify each of the following angles by using the words, *Opposite*, *Adjacent*, *Corresponding*, *Co-interior* or *Alternate*.



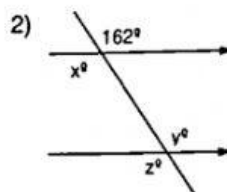
B. Find the size of each of the missing angles in the following diagram giving reasons for your answer.



a = _____ Reason: _____

b = _____ Reason: _____

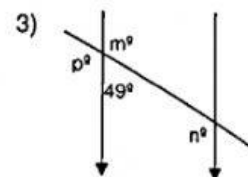
c = _____ Reason: _____



x = _____ Reason: _____

y = _____ Reason: _____

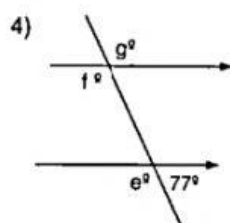
z = _____ Reason: _____



m = _____ Reason: _____

n = _____ Reason: _____

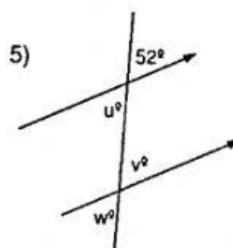
p = _____ Reason: _____



e = _____ Reason: _____

f = _____ Reason: _____

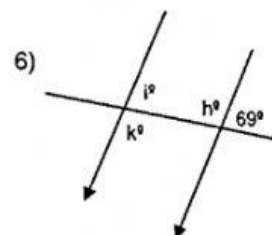
g = _____ Reason: _____



u = _____ Reason: _____

v = _____ Reason: _____

w = _____ Reason: _____



h = _____ Reason: _____

i = _____ Reason: _____

k = _____ Reason: _____