



Name:


Class: Date: / / 2022

WORKSHEET - MATHS

Week 30 – Equal sharing

Teacher's comments:.....

Exercise 1: Write the division sentence and answer the questions.



$$\underline{\quad} \div \underline{\quad} = \underline{\quad}$$

How many bananas does each kid get?

..... bananas



$$\underline{\quad} \div \underline{\quad} = \underline{\quad}$$

How many muffins does each kid get?


..... muffins



$$\underline{\quad} \div \underline{\quad} = \underline{\quad}$$

How many pretzels does each kid get?

..... pretzels



$$\underline{\quad} \div \underline{\quad} = \underline{\quad}$$

How many cherries does each kid get?

..... cherries

Exercise 2: Read the words and write the division sentence.

a. fourteen divided by two equals seven

$$\boxed{\quad} \div \boxed{\quad} = \boxed{\quad}$$


b. Twelve divided by four equals three

$$\boxed{} \div \boxed{} = \boxed{}$$


c. Fifteen divided by three is equal to five

$$\boxed{} \div \boxed{} = \boxed{}$$

Exercise 3: Fill in the blanks. (Only write the number)



How many groups of 2 are there?



How many groups of 3 are there?




How many groups of 4 are there?



How many groups of 5 are there?



How many groups of 4 are there?



How many groups of 3 are there?
