



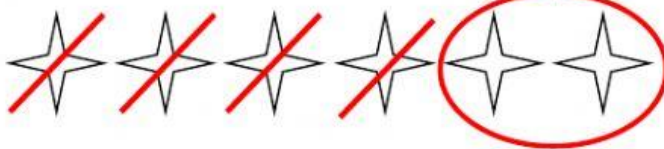
Name -

**Phase 1- Foundation Numeracy**  
**Class Worksheet -15**


Stage-	Beginner	Grade-	1
Conceptual Area -	Operations on Number System	Topic-	Subtraction

- A. Subtract the numbers in the box and fill in the blanks. Refer the images below the corresponding box for guidance.


**a.  $6 - 4 = 2$**



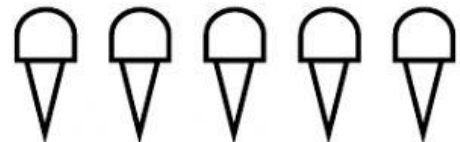
**b.  $9 - 8 = \underline{\quad}$**



**c.  $12 - 10 =$**



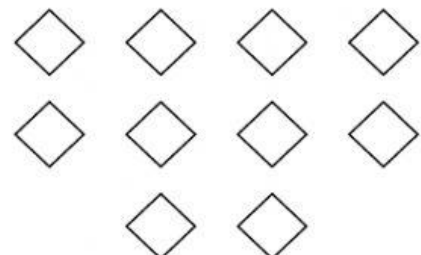
**d.  $5 - 5 = \underline{\quad}$**



**e.  $7 - 5 = \underline{\quad}$**




**f.  $10 - 4 = \underline{\quad}$**




B. Subtract the numbers and fill the box . Refer the images below the corresponding question for guidance.


a.  $7 - 3 =$




b.  $6 - 4 =$




c.  $5 - 5 =$



d.  $8 - 3 =$



e.  $10 - 2 =$



f.  $9 - 4 =$

