

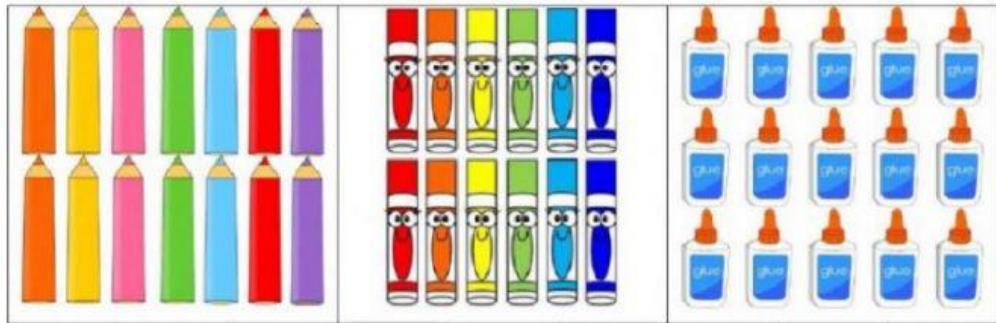
Mathematics Revision 2

1. Select the 6th butterfly.



2. What number comes **before** 16? _____

3. Select the set with 14 objects.



4. Type the missing numbers.



5. Jantje loves animals. He has 6 turtles, 4 parrots and 6 dogs. How many animals he has in all?

Answer: _____ animals

6. Measure the pencil using the paperclips.



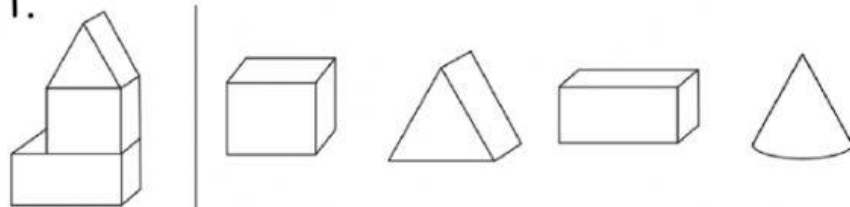
The pencil is _____ paperclips long.

7. How much money do I have?



Answer: _____ dollars

8. Select all the 3D shapes needed to build the shape on the left.















9. Complete the sentence below.



The _____ is lighter than the _____.

10. The pictograph shows the votes for favourite fruits in a class. Look at the pictograph and answer the questions below.

Our Favourite Fruits

Apple						
Strawberry						
Banana						

Key: one picture = 1 vote

- a) How many children voted in **all**? _____
- b) How many children like **apples**? _____
- c) Which fruit **most** children like? _____
- d) Which fruit is the **least** favourite? _____
- e) How many **more** children like **strawberry** than **apple**? _____