

# St Stephen's Anglican Primary School






Easter Term Test

Second Year Carter

Mathematics

**Name:**

**You are required to answer ALL questions on this paper.**

No.	Questions	Marks
20.	<p>Edd has <b>nine yellow cars</b>, Paul has <b>six red cars</b> and Tom has <b>four green cars</b>. How many cars do they have in <b>all</b>?</p> <p><b>Write a number sentence showing your answer using the symbols below to help you fill it in.</b></p> <p>    </p>	2 mrk

21.	<p>Steven has 18 sweets. He gave 6 to Ana. How many does he have now?</p> <p><b>Write a number sentence showing your answer using the symbols below to help you fill it in.</b></p> <div data-bbox="547 436 1023 515" data-label="Image"> </div>	2 mrk
22.	<p>Look at the image below to answer the following questions. Write the answers in space provided.</p> <div data-bbox="215 1014 933 1619" data-label="Image"> </div> <p>a. How many lollipops are there in the picture above?</p>	


b. How many more lollipops would we need to have 20 lollipops?

c. How many lollipops would we need to give away to **only** have 3 lollipops?

3 mrk

23. Using the image below.


How many groups of two's would you get from the items in the picture below?



Answer

2mrk

24. The items below were bought at the supermarket.



a) Put items from above that are the same into one group. Use drag and drop.

--	--	--	--	--

Butter

Milk

Juice

Bread

Chicken

2 mrks

b) Answer the following questions in the space provided.

	1. How many juice is there?	1 mrk
	2. How many bread and butter is there <b>altogether</b> ?	2 mrks
	3. How <b>much more</b> juice is there than milk?	2 mrks
	4. How many <b>items</b> are there <b>in all</b> ?	1 mrk
	<b>TOTAL 60 MRKS</b>	