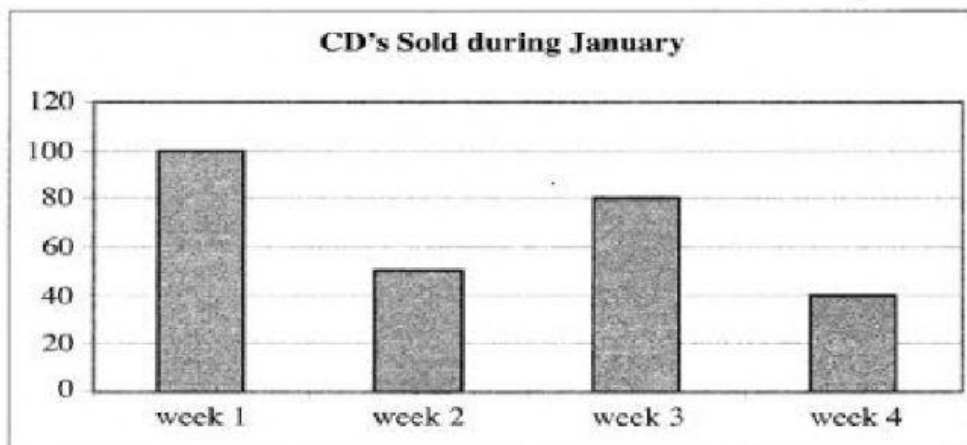


## Bar Graph

Answer all of the questions below.

1)



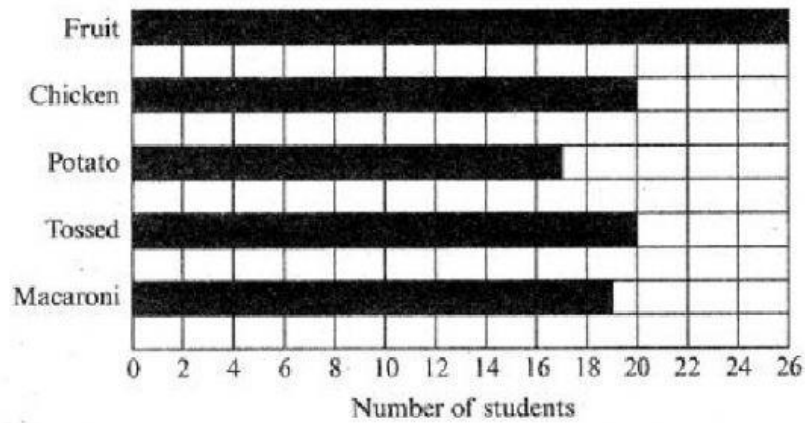
a) In which week was the largest number of CD's sold? \_\_\_\_\_

b) In which week was the least number of CD's sold? \_\_\_\_\_

c) How many more CD's were sold in week 3 than in week 2?  
\_\_\_\_\_

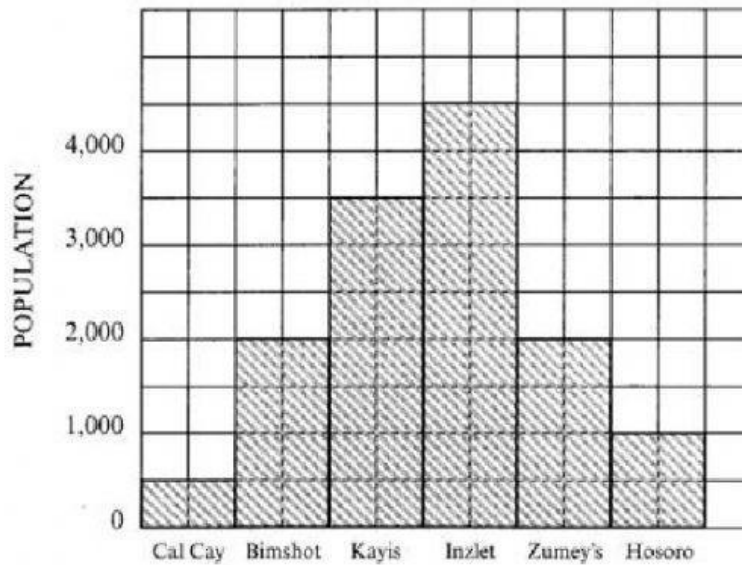
d) How many CD's were sold or the entire four weeks ? \_\_\_\_\_

- 2) Grade 9 voted on the type of salad they liked. Anthony made a bar graph to show the results of the survey. Use the bar graph to answer the questions which follow.



- a) Which salad is the favourite salad? \_\_\_\_\_
- b) How many students voted for macaroni salad? \_\_\_\_\_
- c) How many more students chose fruit salad than potato salad? \_\_\_\_\_
- d) How many students voted altogether? \_\_\_\_\_

- 3) The histogram below shows the population of six islands. Use it to answer the questions which follow.



- (a) Which island is the most populated? \_\_\_\_\_
- (b) Name the two islands which have the same number of persons.  
\_\_\_\_\_ and \_\_\_\_\_
- (c) Write down the total population of the six islands. \_\_\_\_\_
- (d) How many more people are there in Kayis than Hosoro? \_\_\_\_\_

