
























Infant 1 Term 2 Test science/Agri-Science



Name: _____

Nos	Question	Marks
1.	<p>Match the Object to its Function.</p> <div><div> •</div><div> • To store items</div><div> •</div><div> • For pouring into small openings</div><div> •</div><div> • For turning screws</div><div> •</div><div> • To provide light.</div><div> •</div><div> • To store food</div></div>	5
2.	<p>Select the tools used in the garden and on the farm.</p> <div> </div>	3

3.	Select whether the statements are True or False . When we push objects they get closer to us. _____ We pull the string when flying a kite. _____ When we pull objects they get further away from us. _____ We can push the keys in a piano. _____	4						
4.	Match the types of farm to the statement. <table><tr><td>Animal farm</td><td>A farm that grows crops and takes care of animals.</td></tr><tr><td>Mixed farm</td><td>A farm that rears animals.</td></tr><tr><td>Plant farm</td><td>A farm that grow crops.</td></tr></table>	Animal farm	A farm that grows crops and takes care of animals.	Mixed farm	A farm that rears animals.	Plant farm	A farm that grow crops.	3
Animal farm	A farm that grows crops and takes care of animals.							
Mixed farm	A farm that rears animals.							
Plant farm	A farm that grow crops.							
5.	Choose all the Living Things. Choose Living things: <div> </div>	4						

6. Type in **Push** or **Pull** by looking at the pictures.

6



7. Answer Yes or No.

5

1 Living Things need space

YES

NO

2 Non-living things
reproduce

YES

NO

3 Living things breathe

YES

NO

4 Living things need water

YES

NO

5 Non-living things grow

YES

NO

8. Label the part of the Earth. **Daytime** or **Nighttime**

2



9. Read the sentences and type the correct word.

8

WORD BANK

moon	sun	day	earth
stars	rotation	night	morning

- a. The _____ shines during the _____.
- b. At night, we can see _____ and _____.
- c. The _____ goes around the sun.
- d. The earth's _____ causes day and night.
- e. I sleep at _____ and wake up in the _____.

The End 😊