



Name:

Class:

Part 1. Choose the correct answer. [5]

1. Which holds the least?



A.




B.



C.

2. What's next?



A.



B.



C.

3. Which has the biggest capacity?



A.



B.



C.

4. Which has the smallest capacity?



A.



B.



C.

5. Which holds the most?



A.




B.

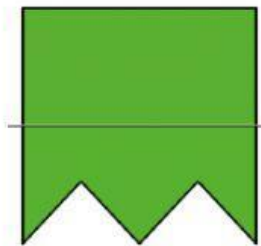


C.

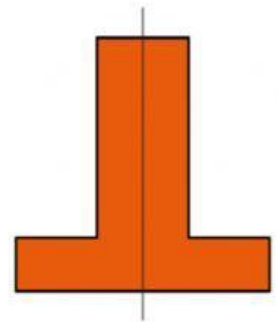
Part 2. Look and write Yes or No. [2]

Is it symmetrical?









Part 3. Look and choose the correct words or shapes. [3]

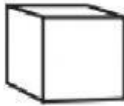
1.



sphere



2.




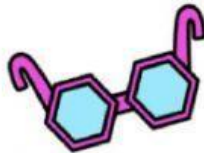
cube



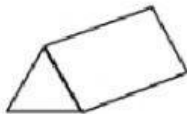
3.





hexagon



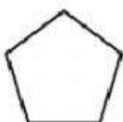
4.



5.



6.



Part 4. Read and write 1, 2, 3, 4 under each picture. [4]

1. Order the objects from the smallest capacity to the biggest capacity.

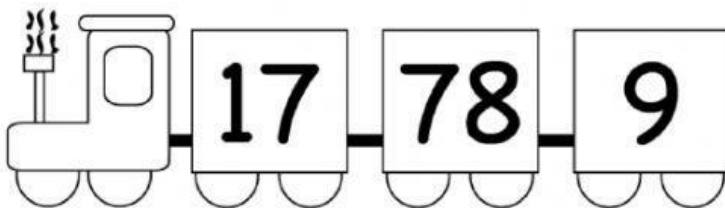


2. Order the objects from the biggest capacity to the smallest capacity.




Part 5. Order the numbers. [3]

a. From the biggest to the smallest

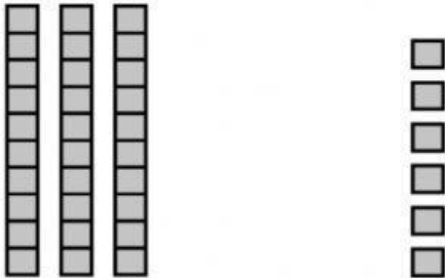
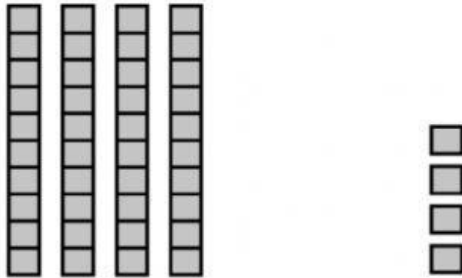


--	--	--

b. From the smallest to the biggest



Part 6. What are these numbers? [3]

 Tens <input type="text"/> Ones <input type="text"/> Number <input type="text"/>	 Tens <input type="text"/> Ones <input type="text"/> Number <input type="text"/>
---	--

___ THE END ___