



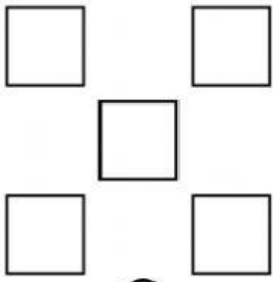


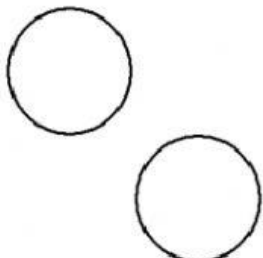


Name -


Phase 1- Foundation Numeracy
Class Worksheet -2

Stage-	Beginner	Grade-	1
Conceptual Area -	Number System	Topic-	Pre-number concepts


Instructions: Look at the solved examples and answer the questions.

1. Colour and circle how many shapes

 4 5 6	 7 8 9	 6 7 5
 1 2 3	 6 7 8	 6 8 7



10 11 12 13 14 15



15 16 17 18 19 20

2. Take the turtle to the right leaf

