




Name : \_\_\_\_\_

**ANSWER ALL QUESTIONS BELOW :D**

1. **Choose** the correct type of energy for each of the picture below:

Movement energy	Electrical energy	Sound energy
Light energy	Stored energy	Heat energy



2. What **energy changes** took place in each of the picture?

(a) When you **rub the palms of your hands together**.



Energy →  Energy

(b) When you **clap your hands**.



Energy →  Energy

(c) When you **switch on the radio**



Energy →  Energy

(d) When you **switch on the torchlight**



Energy →  Energy  
Heat Energy and

3. What is energy?

\_\_\_\_\_