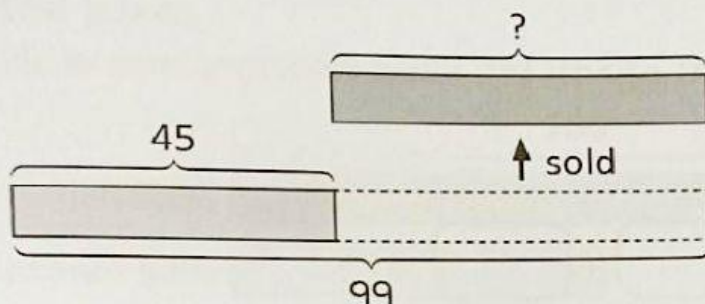


Practice 5 Subtraction: Taking Away One Set

Solve. Use models to help you.

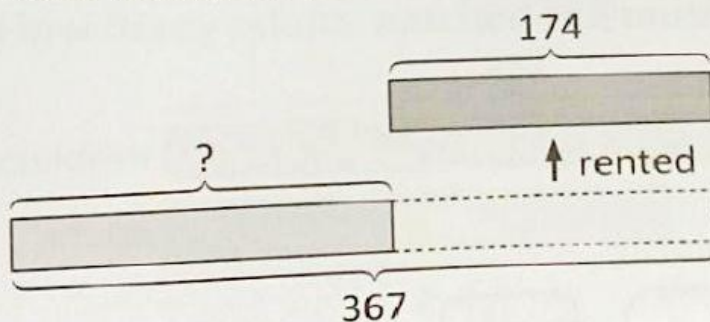
- Hassan had 99 skate scooters.
He sold some of them and had 45 skate scooters left.
How many skate scooters did Hassan sell?



$$99 - 45 = \boxed{}$$

Hassan sold _____ skate scooters.

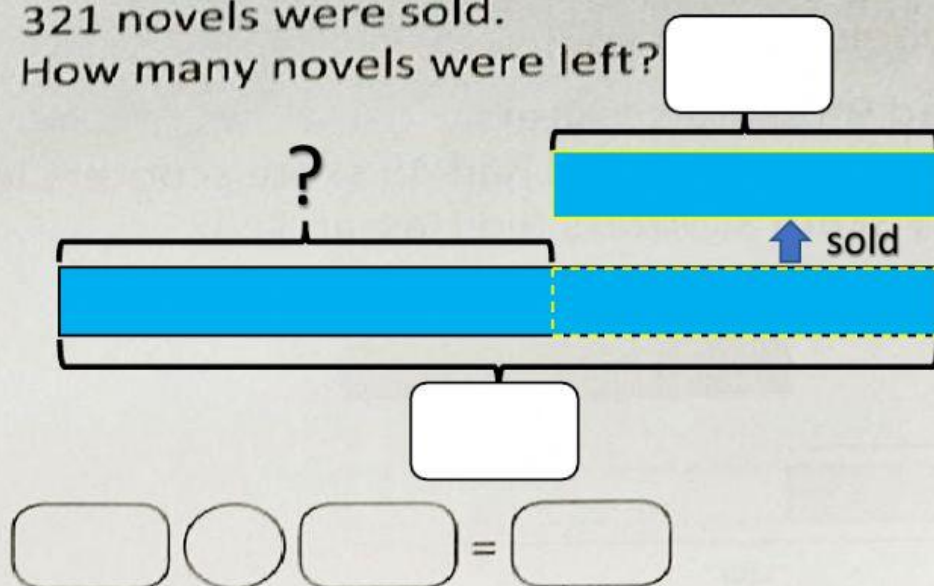
- There were 367 bicycles at a bicycle shop.
174 bicycles were rented out.
How many bicycles were left?



$$\boxed{} \bigcirc \boxed{} = \boxed{}$$

_____ bicycles were left.

3. There were 789 novels at a bookshop.
321 novels were sold.
How many novels were left?



4. There were 627 tadpoles in a pond.
488 tadpoles grew into frogs.
How many tadpoles were left in the pond?

