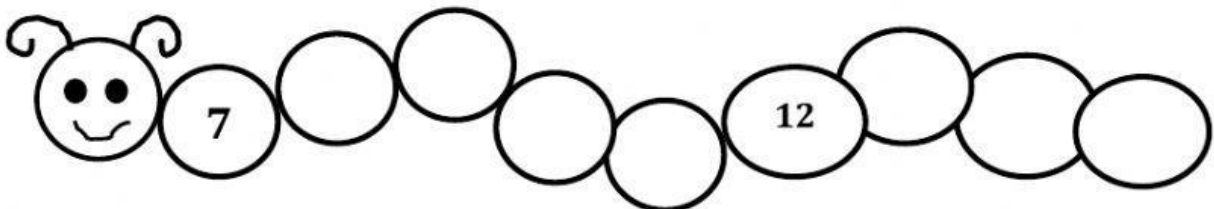
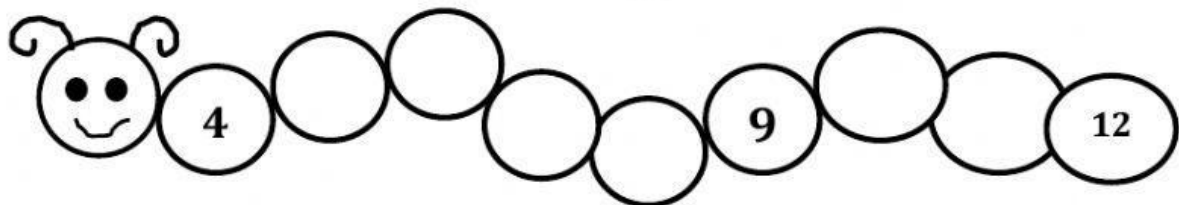

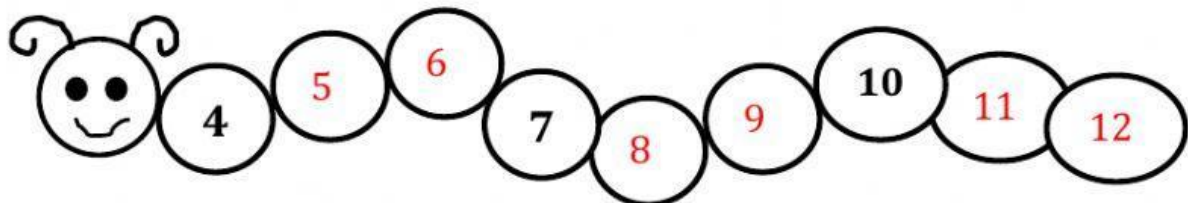




Name -			
Phase 1- Foundation Numeracy Class Worksheet -1			
Stage-	Beginner	Grade-	1
Conceptual Area -	Number System	Topic-	Sequencing of numbers 1-20

Please follow the instructions: Look at the solved examples and answer the questions.

1. Fill the missing numbers.





15	17	13	10
14			
13			
12			
11	13	9	6

10	5	12	7
9		11	8
		10	9

15		6	
14		5	



2. Colour the boxes from 1 to 20 in order to help the monkey find the tree

16	15	14	13		
17	7	11	12		
18	19	10	9	8	1
2	20	4	9	7	2
		14	10	6	3
		5	11	5	4