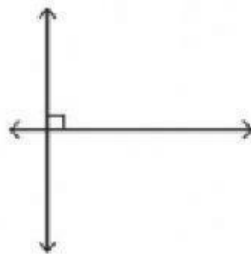


Write each pair of lines as parallel, perpendicular or intersecting.


1)




2)



3)



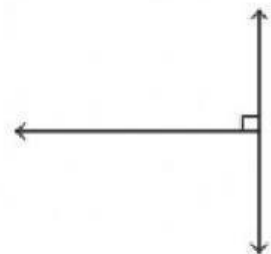
4)



5)




6)



7)



8)



9)

