

Name: _____

Year 1Bijak







Thursday

3rd March 2022

Chapter 5 - Numbers to 20

Topic: Compare

1.) Count the number of items and then, compare.

Fill in the blank with **greater** or **smaller**:

(a) The erasers are _____ than the oranges.

(b) The oranges are _____ than the shirts.

(c) Arrange the numbers in order.

Begin with the **smallest**:

_____, _____, _____

(d) Arrange the numbers in order.

Begin with the **greatest**:

_____, _____, _____

2.)

Compare the numbers.

Fill in the blanks.

(a)

17

18

12

_____ is the smallest number.

_____ is the greatest number.

(b)

13

16

15

10

_____ is the smallest number.

_____ is the greatest number.