

**ICM**INSAN
CENDEKIA
MADANI**Negative Numbers**

Name : _____

Class : _____

Teacher : _____

Date : _____

☐ Pre-assessment☐ Individual guided practice☐ Independent/ fluency practice☒ Assessment

Marks:

25

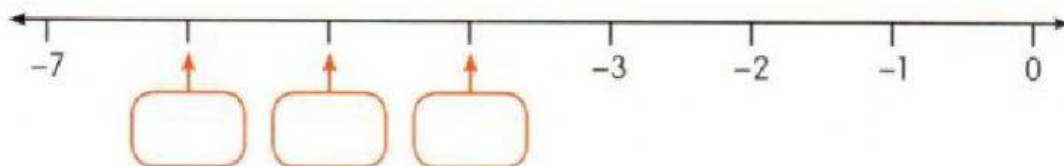
Score:

Answer the following questions clearly and correctly!

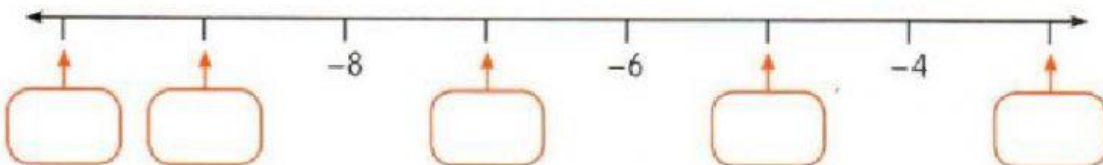
1. Write the missing numbers in the boxes.

[12]

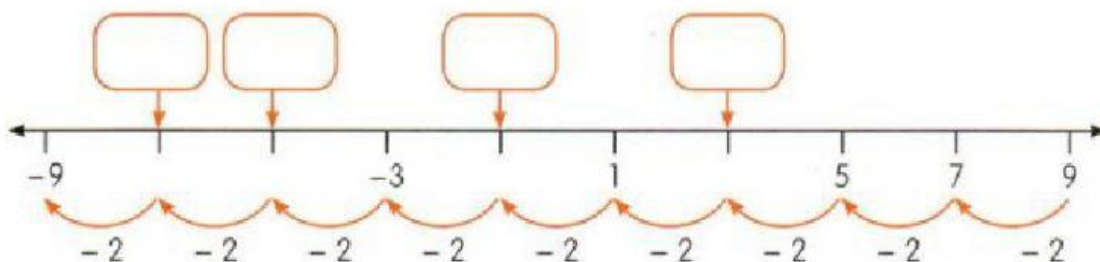
a.



b.



c.



2. Write the temperatures shown on thermometers.

[2]

a.



°C

b.

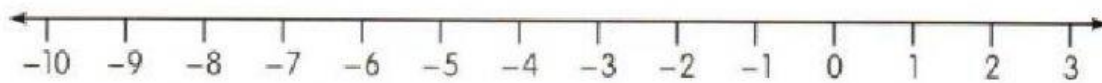


°C

3. Write > or < to make the statements correct.

[8]

Use the number line to help you.



(a) 1 -10

(b) 0 -4

(c) -3 3

(d) -2 1

(e) -7 2

(f) -5 -8

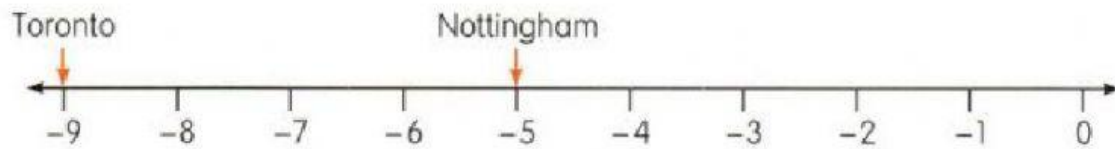
(g) -9 -6

(h) -1 -4

4.

[1]

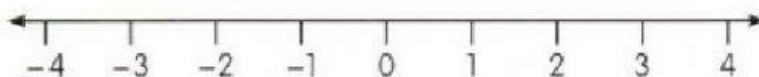
The temperature in Nottingham is -5°C .
 The temperature in Toronto is -9°C .
 Which city is colder?



5.

[2]

The temperature of a tub of ice cream was -4°C .
 The temperature of a glass of milk was 5°C higher.
 What was the temperature of the glass of milk?


 $^{\circ}\text{C}$