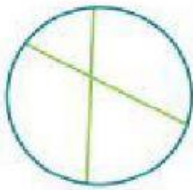

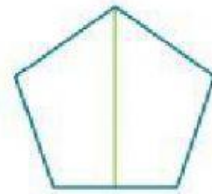


Practice

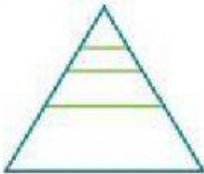
3 Write *equal* or *unequal* for the parts of each shape.







4 Draw lines to match each shape to the name of its parts.





eighths

fourths

4 unequal parts

3 unequal parts



Practice

Shade the shape to show a unit fraction.

5 $\frac{1}{2}$



6 $\frac{1}{6}$



Write the unit fraction shown.

