

Final Examination 2022

School: Anuban betong
Subject: Mathematics
Class: Primary 3
Marks: 10

Teacher: Yursem Seipainao Awungshi
Date: March 2022
Time: 40 minutes

Directions: There are 30 questions and all the questions are compulsory.

A. Choose the right answer.

1. Write the time in 24-hour system.



Morning

10:09 hours

10:10 hours

- 2.



Night

20:22 hours

20:25 hours

3. Write the time in 12-hour system. (a.m./p.m.)



Morning

09:10 a.m.

09:00 a.m.

4.

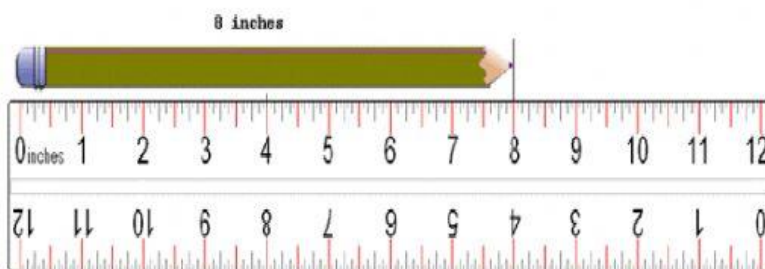


Evening

04:00 p.m.

04:42 p.m.

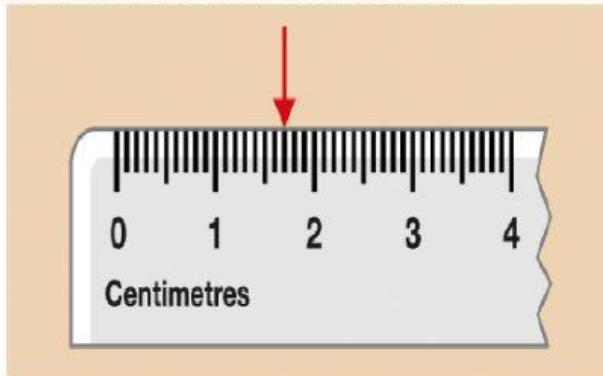
5. How many cm is the pencil?



8 cm

9 cm

6. Measure the arrow in mm and cm.



1 cm 7 mm

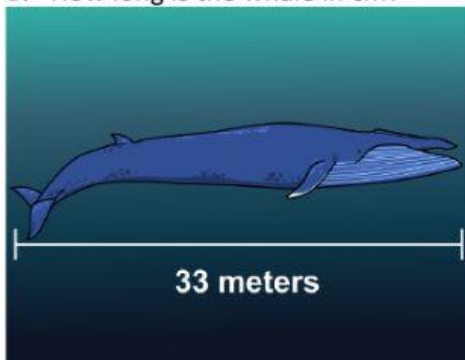
1 cm 9 mm

7. How many m do we have in 1km?

500 m

1000 m

8. How long is the whale in cm?



3300 cm

33000 cm

9. How many km is 10,000 m?

10 m

100 m

10. The motorbike is 2m 45cm. How long is the motorbike in cm?



245 cm

2045 cm

A. Choose the right answer.

11. 6,030 g = 6kg 30 g / 60kg 30g

12. 8 kg 275 g = 8075 g. / 8275 g

13. 3 t = 3000 kg / 13000 kg

14. 15,000 kg = 15 t / 16 t

15. 4,129 kg = 4 t 129 kg / 4 t 130 kg

16. 9 t 850 kg = 9850 kg / 90850 kg

B. Compare the masses of the object and chose the answer.



Whale 58 metric ton



Elephant 5 metric ton 385 kg

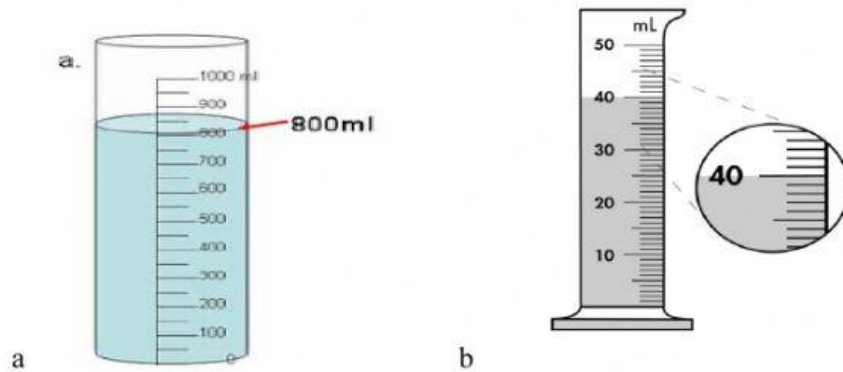
17. The mass of the whale is 58000 kg/ 5800 kg.

18. The mass of the elephant is 5385 kg / 55385 kg

19. The whale is heavier than the elephant by 52 t 615kg / 53 t 58 kg

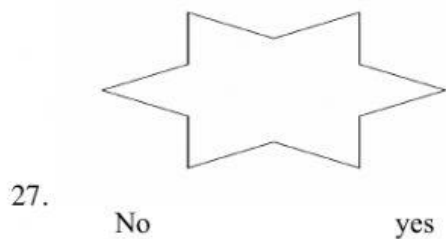
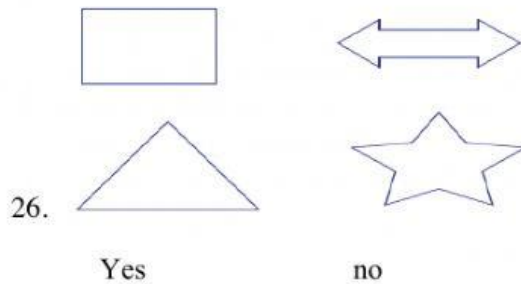
20. The weight of whale and elephant combined is 56 t 578 kg / 63 t 385 kg

C. From the diagram below, choose the right answer.




21. Beaker A has 800 ml / 900 ml
22. Beaker B has 41ml / 40 ml
23. Beaker A has more / less volume of water than beaker B.
24. Total volume of beaker A and B is 840 ml/ 845 ml
25. Beaker b minus (-) beaker a = 760 ml/ 750 ml

D. Symmetrical shape. Yes or No.



E. Answer true or false.

28. Total numbers of visitors in the zoo are 120 people. (😊 = 10 people)



29. wednesday has the most visitors?

true false

30. Tuesday has the least visitors?

true false