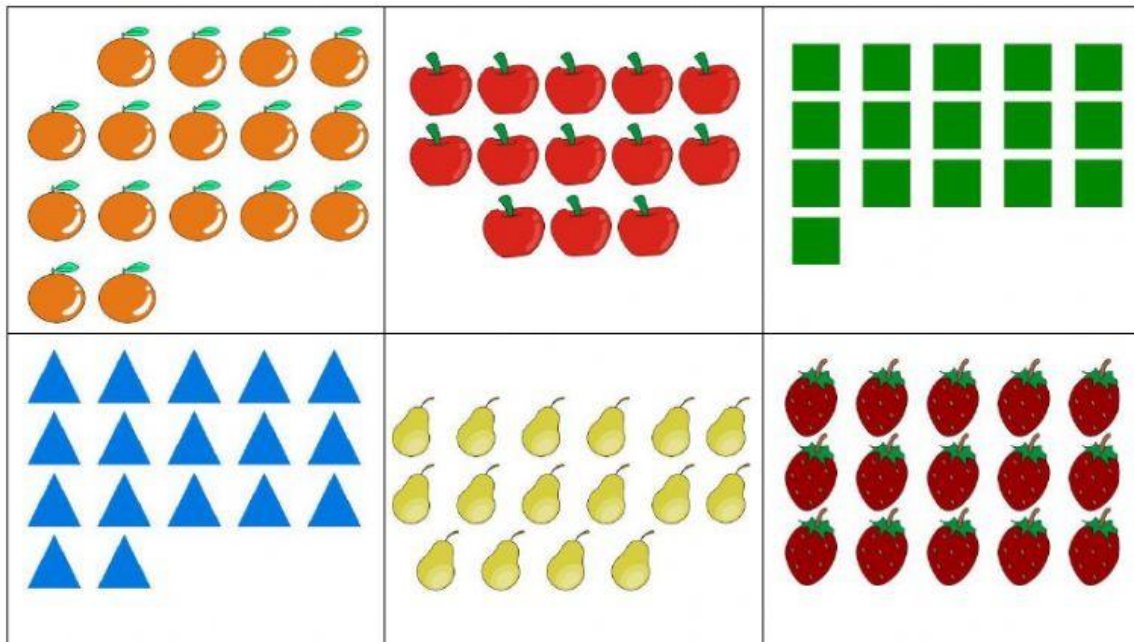


## Weekly Test 7- Mathematics


1. Write the word name for 16. \_\_\_\_\_
2. Select all the sets with **sixteen** objects.



3. Solve the following:
  - a)  $4 + \underline{\hspace{2cm}} = 16$
  - b)  $13 + \underline{\hspace{2cm}} = 16$
  - c) 16 is            more than 15.
  - d) Azariah has 11 apples. Saydee has 5 bananas.  
How many fruits they have **altogether**?

\_\_\_\_\_


4. Look at the three houses below and answer the following questions.



Green House



Blue House



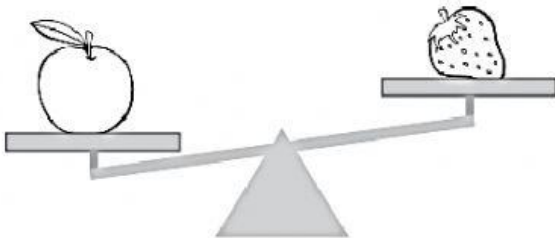
Red House

- a) Which house is the **shortest**? \_\_\_\_\_.
- b) Which house is the **tallest**? \_\_\_\_\_.
- c) The \_\_\_\_\_ house is **taller than** the \_\_\_\_\_ house.

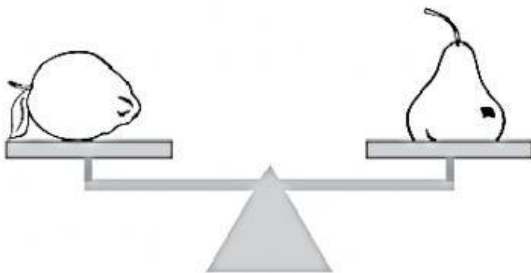
5. Number the pictures (1,2,3,4) from the lightest to the heaviest.



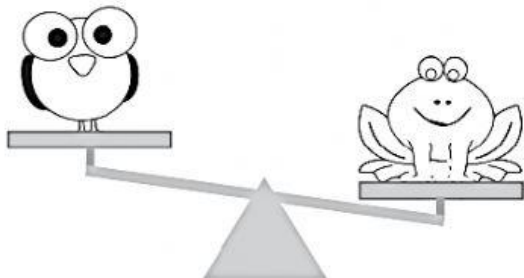
6. Look at the scales and select the correct answer.



The apple is \_\_\_\_\_ than the strawberry.



The lemon weighs the \_\_\_\_\_ the pear.



The bird is \_\_\_\_\_ than the frog.