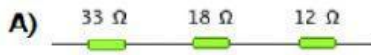


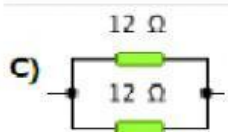
1. Calcula la resistencia equivalente de las siguientes agrupaciones de resistencias. Los valores se expresan en ohmios a la centésima con redondeo. Por ejemplo 3,458 es 3,46 y 1,923 es 1,92



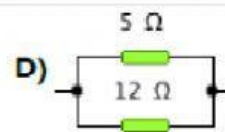
Sol: Ω



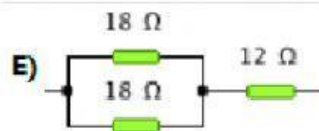
Sol: Ω



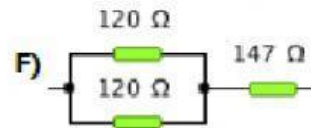
Sol: Ω



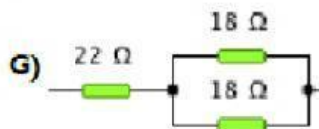
Sol: Ω



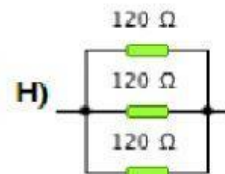
Sol: Ω



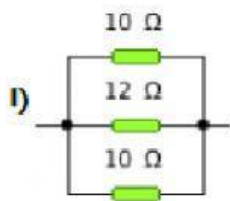
Sol: Ω



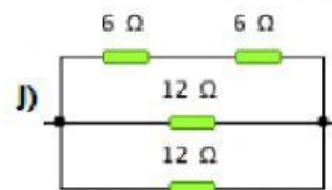
Sol: Ω



Sol: Ω



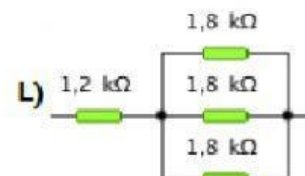
Sol: Ω



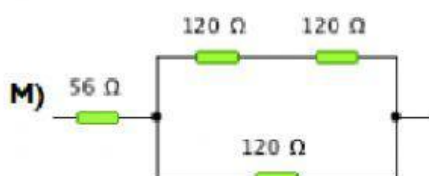
Sol: Ω



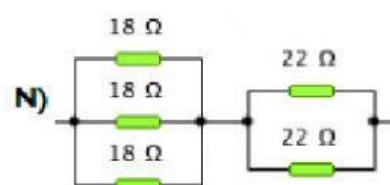
Sol: Ω



Sol: Ω



Sol: Ω



Sol: Ω