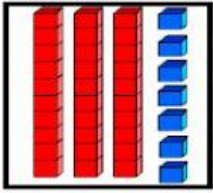
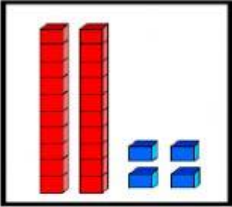


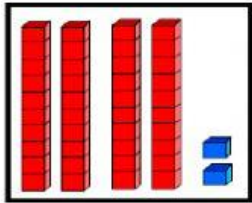
UNE LAS DECENAS Y UNIDADES CON LA SUMA DE UNIDADES.



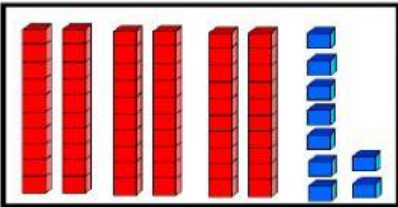
$$20 + 4$$



$$30 + 7$$



$$60 + 9$$



$$40 + 2$$