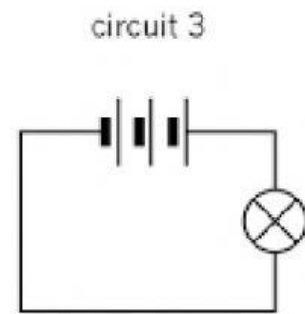
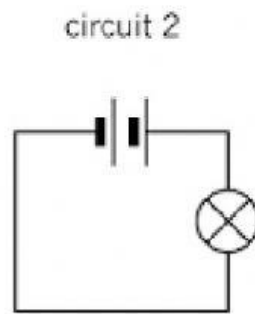
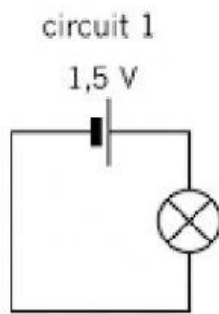


Name: _____

Date: _____

Dry cells in series

Look at the circuit below and answer the following questions.



1. In which circuit was the light bulb the dimmest?
_____.
2. In which circuit was the light bulb the brightest?
_____.
3. Based on your observations, what can you say about the number of cells in series and the brightness of the light bulb in a circuit?
_____.
4. What can you do to make the light bulb brighter than in Circuit 3?
_____.