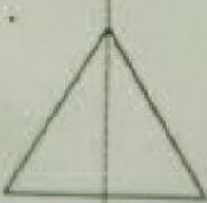





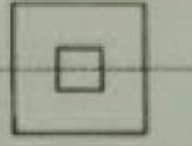
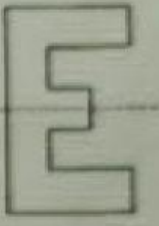



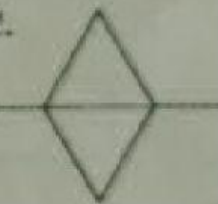





SOLIDES ET FIGURES

LA SYMETRIE ORTHOGONALE

Le segment de droite est-il un axe de symétrie? OUI/NON?

1.  <input type="button" value="OUI"/> <input type="button" value="NON"/>	2.  <input type="button" value="OUI"/> <input type="button" value="NON"/>	3.  <input type="button" value="OUI"/> <input type="button" value="NON"/>	4.  <input type="button" value="OUI"/> <input type="button" value="NON"/>
5.  <input type="button" value="OUI"/> <input type="button" value="NON"/>	6.  <input type="button" value="OUI"/> <input type="button" value="NON"/>	7.  <input type="button" value="OUI"/> <input type="button" value="NON"/>	8.  <input type="button" value="OUI"/> <input type="button" value="NON"/>
9.  <input type="button" value="OUI"/> <input type="button" value="NON"/>	10.  <input type="button" value="OUI"/> <input type="button" value="NON"/>	11.  <input type="button" value="OUI"/> <input type="button" value="NON"/>	12.  <input type="button" value="OUI"/> <input type="button" value="NON"/>
13.  <input type="button" value="OUI"/> <input type="button" value="NON"/>	14.  <input type="button" value="OUI"/> <input type="button" value="NON"/>	15.  <input type="button" value="OUI"/> <input type="button" value="NON"/>	