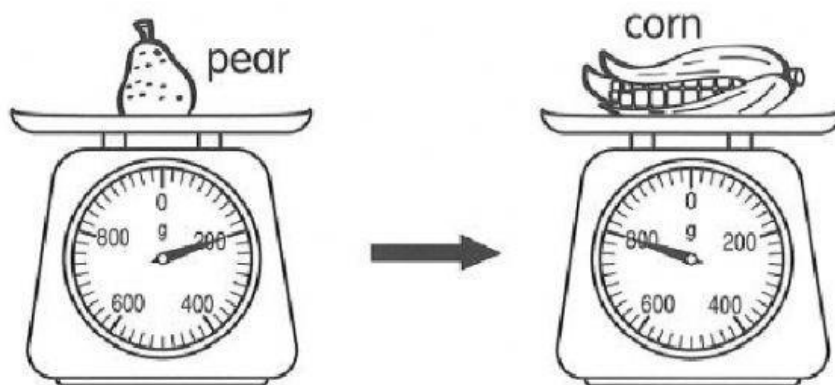


Name: \_\_\_\_\_ Date: \_\_\_\_\_

1. Look at the picture.




- (a) The mass of the pear is \_\_\_\_\_ g.
- (b) The mass of the corn is \_\_\_\_\_ g.
- (c) The corn is \_\_\_\_\_ g heavier than the pear.
- (d) Find the total mass of the pear and the corn.

$$\boxed{\phantom{000}} \bigcirc \boxed{\phantom{000}} = \boxed{\phantom{000}}$$

The total mass of the pear and the corn is \_\_\_\_\_ g.

Choose the correct answer. Write its letter in the brackets provided.


2.



The mass of the bag of beans is \_\_\_\_\_ g.

- a) 200                      b) 230  
c) 250                      d) 300                      (           )

3. The mass of the jackfruit is 5kg.



The mass of the banana is \_\_\_\_\_ kg.

- a) 5                              b) 2  
c) 7                              d) 12                              (           )