



Name:

Class: Date: ... / ... /


WORKSHEET – GRADE 3

MATHS – Revision for Midterm test 2

Teacher's comments:

I, CHOOSE THE BEST ANSWER.

1, Which **multiplication** sentence is represented by this array?



A. 2×5

B. 6×2

C. 3×6

D. $6 + 6$

2, Which **multiplication** sentence is represented by this array?



A. 3×4

B. 8×2

C. 4×4

D. $8 + 8$

3, Timo has 9 boxes of blocks. Each box holds 7 blocks. How many blocks does Timo have?

A. 70 blocks

B. 63 blocks

C. 16 blocks

D. 2 blocks

4, Calculate:

12 multiplied by 10 equals

A. 120

B. 2

C. 22

D. 102

5, Fill in the blank:

... times 8 equals 64

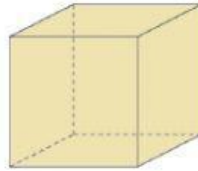
A. 6

B. 7

C. 8

D. 9

6, What shape is this?



- A. Cylinder B. Cuboid C. Cube D. Cone

7, I am a 2D-shapes. I have 5 vertices and 5 sides. What am I?

- A. Pentagon B. Hexagon C. Octagon D. Square

8, How many **vertices** are there in 10 circles?

- A. 10 B. 8 C. 4 D. 0

9, What 3D-shape looks like a party hat?



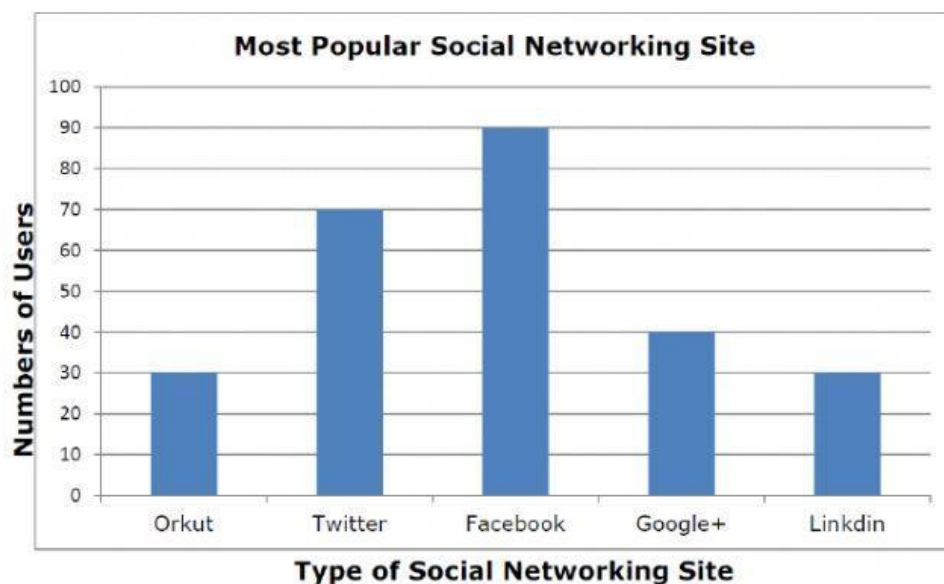
- A. Cuboid B. Cone C. Cylinder D. Sphere

10. Which shapes have **more than** 5 sides?

- A. Pentagon, Hexagon B. Circle, Pentagon
C. Hexagon, Octagon D. Pentagon, Octagon

II, FILL IN THE BLANKS.

People were asked about their favorite social networking site. Study the bar graph and answer.



1. Which is **the most** popular social networking site?

Answer: _____

2. Which two sites are **equally** as popular?

Answer: _____ and _____

3. How many users like Twitter?

Answer: _____ users.

4. Which site is **the least** popular?

Answer: _____

5. Which site has **more than** 80 users?

Answer: _____

6. **How many more** users like Facebook than Orkut?

Answer: _____ users.