






I. Identify the different mouse pointers given below and name them: -

1.		-----	_____
2.		-----	_____
3.		-----	_____
4.		-----	_____
5.		-----	_____

Busy

Normal

Four headed arrow

Double headed arrow

I Beam

II. Match the correct shortcut keys by drawing lines:-

Windows logo key		Task view
Windows logo key + Tab key		Arrange the icons on the desktop / changing the desktop background
Windows logo key + D		START
Right click on blank area		Desktop