



Sarasas Witaed Ratchaphruek School
Students Assessment for Online Teaching
Finals, Semester 2/ 2021
Grade 1

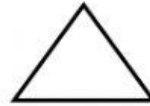
Subject: Mathematics 20 points
Time: 90 minutes

Name: _____ Grade: _____ No: _____

Part 1: Multiple Choice (20 Points)

Directions: Choose the letter of the correct answer.

1. What is the name of the shape shown?



a. square

b. triangle

c. circle

2. What is the name of the shape shown?




a. oval

b. rectangle

c. triangle

3. What is the name of the shape shown?




a. circle

b. oval

c. diamond

4. What is the name of the shape shown?



a. rectangle

b. circle

c. square

5. What is the name of the shape shown?



a. circle

b. diamond

c. oval

6. I have four corners and four equal sides. What am I?

a. triangle

b. square

c. circle

7. Which of the following thing is a circle?

a. chair

b. clock

c. book

8. I don't have any sides. What am I?

a. circle

b. rectangle

c. diamond

9. Which of the following has four sides?

a. moon

b. balloon

c. table

10. What is the shape of a kite?

a. oval

b. diamond

c. circle

11. There are **17** children at Swensen's. **12** more come and **8** leave. How many children are at Swensen's now?

a. 21

b. 12

c. 31

17	+
12	
<hr/>	
<input type="text"/>	.
8	
<hr/>	
<hr/>	

12. There are **37** mangoes on the tree. Monkeys eat **19** and children eat **7**. How many mangoes are left on the tree?

a. 10

b. 11

c. 12

37	.
19	
<hr/>	
<input type="text"/>	.
7	
<hr/>	
<hr/>	

13. There are **19** cars in the carpark. **28** more cars come and **12** cars leave. How many cars are left in the carpark?

a. 25

b. 53

c. 35

19	+
28	
<hr/>	
<input type="text"/>	.
12	
<hr/>	
<hr/>	

58

29



11

14. The shopkeeper has **58** eggs in the box. She sells **29** and breaks **11**. How many eggs are left?

a. 17

b. 18

c. 28

29

16



2

15. There are **29** children on the bus. **16** get off and **2** get on the bus. How children are left?

a. 15

b. 25

c. 14

Pictograph. Look at the graph and answer the following questions.



16. What is the title of the graph?

a. Favorite Food

b. Favorite Pets

c. Favorite Color

17. How many dogs are there?

a. eight

b. seven

c. six

18. Which animal was liked the least?

a. cat

b. bunny

c. fish

19. How many pets are there altogether?

a. seventeen

b. eighteen

c. nineteen

20. Which animal was liked the most?

a. fish

b. dog

c. bunny

