



Name: _____

Year 1Bijak

Thursday

24th February 2022

Review 1

Before we are going to learn chapter 5, complete the review 1 worksheet below that covered all topics from chapter 1 until 4.

CHAPTER 1- Numbers to 10

1. Match them up!







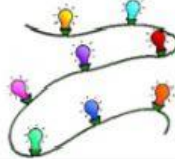

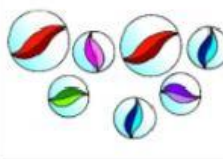
Match the numbers

1	four	seven	6
2	one	ten	7
3	five	nine	8
4	three	six	9
5	two	eight	10

Note: An arrow points from the number 1 to the word 'one'.

2. What's the number?

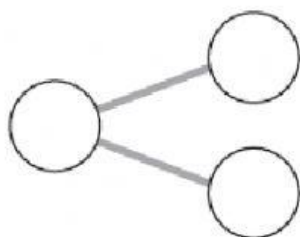
Write the number under the pictures.

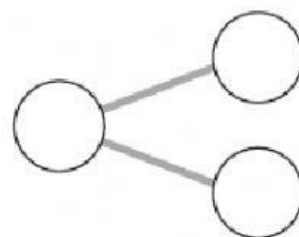
CHAPTER 2 – Number Bonds

- 3.) Complete the number bonds.
Fill in the blanks.

(a) _____ + 5 = 9



(b) 8 – 3 = _____

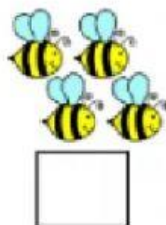


CHAPTER 3 – Addition within 10


- 4.) Add.



+ =



+



=



CHAPTER 4 – Subtraction within 10

Example:



$$\boxed{9} - \boxed{3} = \boxed{6}$$

5.)



$$\boxed{} - \boxed{} = \boxed{}$$



$$\boxed{} - \boxed{} = \boxed{}$$

This work makes me feel:

