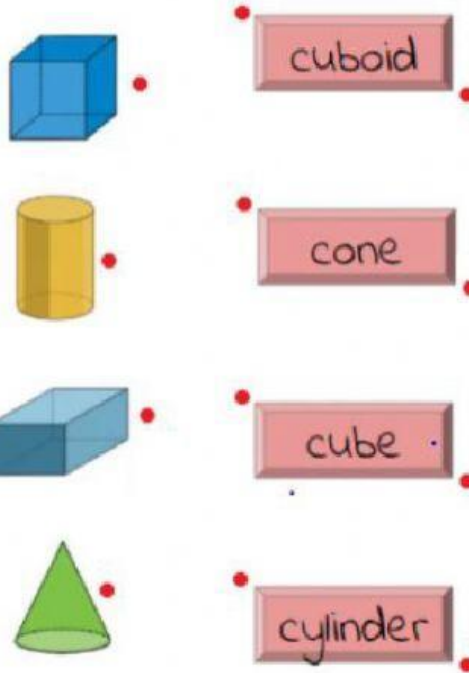


Grade 3

Activity worksheet (level -1)






Solid Shapes

1. Match the Solid shapes with its name







2. Count the shapes:




- a)  ☐
- b)  ☐
- c)  ☐
- d)  ☐
- e)  ☐

Activity worksheet (level -2)

Properties of 3D Shapes

	Sphere	Cube	Cone	Cylinder
				
Faces				
Edges				
Vertices				

Drag and drop the shape next to its description



This shape has 2 faces	
This shape has 3 faces	
This shape has 6 equal faces	
This shape has 12 edges	
This shape has 0 vertices and 0 edges	

Activity worksheet (level -3)

Click on the name of each shape and fill in the blanks

cone

cube

sphere



faces: _____

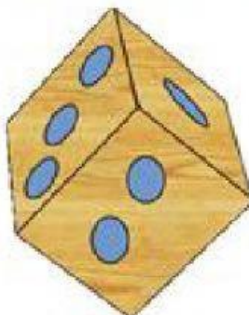
edges: _____

vertices: _____

cylinder

cone

cube



faces: _____

edges: _____

vertices: _____

Cuboid

sphere

cube



faces: _____

edges: _____

vertices: _____

cube

sphere

cylinder



faces: _____

edges: _____

vertices: _____

pyramid

cylinder

cube



faces: _____

edges: _____

vertices: _____