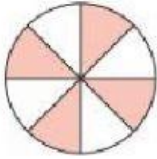


WWA – Week 2 – Math Assessment

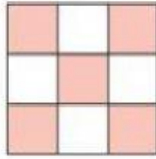
1. Find the missing numerators or denominators:

1.



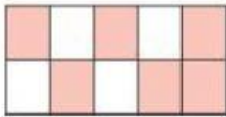
$$\frac{4}{\square}$$

4.



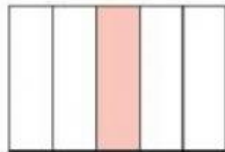
$$\frac{\square}{9}$$

2.



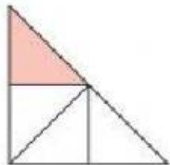
$$\frac{6}{\square}$$

5.



$$\frac{1}{\square}$$

3.



$$\frac{\square}{4}$$

2. Write each fraction in simplest form:

$$\frac{2}{6} = \frac{\square}{\square}$$

$$\frac{4}{8} = \frac{\square}{\square}$$

$$\frac{6}{10} = \frac{\square}{\square}$$

$$\frac{8}{10} = \frac{\square}{\square}$$

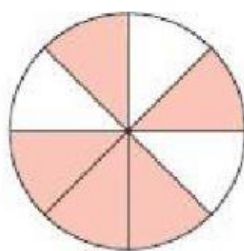
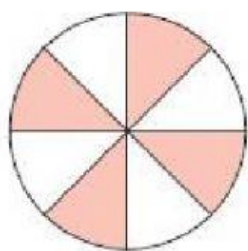
$$\frac{3}{12} = \frac{\square}{\square}$$

$$\frac{9}{12} = \frac{\square}{\square}$$

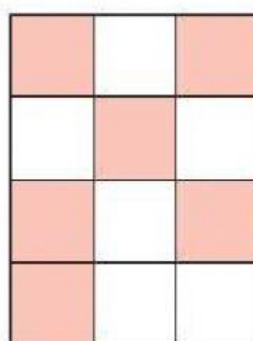
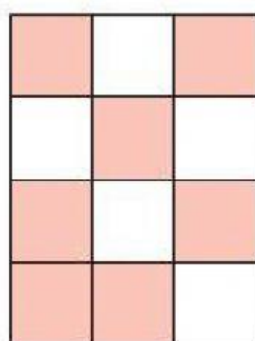
$$\frac{8}{12} = \frac{\square}{\square}$$

$$\frac{10}{12} = \frac{\square}{\square}$$

3. Compare the fractions:



_____ is smaller than _____.



_____ is greater than _____.

4. Compare the following fractions:

Which is less, $\frac{2}{3}$ or $\frac{7}{12}$?

$$\frac{2}{3} = \underline{\hspace{2cm}}$$

$$\underline{\hspace{2cm}} < \underline{\hspace{2cm}}$$

Which is greater, $\frac{5}{8}$ or $\frac{1}{4}$?

$$\frac{1}{4} = \underline{\hspace{2cm}}$$

$$\underline{\hspace{2cm}} > \underline{\hspace{2cm}}$$

5. Order the fractions from the greatest to the least:

$$\frac{4}{6}, \frac{2}{8}, \frac{3}{4}$$

$$\frac{7}{12}, \frac{3}{4}, \frac{1}{6}$$

$$\frac{2}{5}, \frac{8}{9}, \frac{4}{15}$$

6. Order the fractions from the least to the greatest:

$$\frac{2}{3}, \frac{2}{5}, \frac{2}{4}$$

$$\frac{3}{8}, \frac{4}{6}, \frac{1}{4}$$

$$\frac{6}{10}, \frac{3}{6}, \frac{1}{5}$$
