















Weekly Test (From 21/2-25/2)

I. Look and write

- 1   He goes home and then he washes the dishes.
- 2   She
- 3   _____
- 4   _____
- 5   _____

II. Look and choose

1. How many oranges do you estimate will fit on the tray?
- A. 1
B. 6
C. 15
-  
2. There are 30 apples in the big group. How many apples do you estimate there are in the small group?
- A. 5
B. 10
C. 20
-  

III. Look and write the names of the plant parts

