
















Mathematics Weekly Test

Name _____

No.	Questions	Marks
1.	<p>How many objects are there in each set?</p> <div style="display: flex; justify-content: space-around; align-items: center;">   </div>	1
2.	<p>Complete the statements.</p> <p>a) $5 + 6 =$</p> <p>b) $9 + 5 =$</p> <p>c) $\quad + 7 = 11$</p> <p>d) $\quad + 9 = 12$</p> <p>e) 8 add 4 equals</p>	5
3.	<p>Write in words:</p> <p>5</p> <p>9</p> <p>13</p>	3

4.	<p>Select twelve faces in the set.</p> 	1												
5.	<p>Write the number that comes after.</p> <table border="1" data-bbox="513 689 1098 1169"> <thead> <tr> <th colspan="2">After</th> </tr> </thead> <tbody> <tr> <td>5</td> <td></td> </tr> <tr> <td>9</td> <td></td> </tr> <tr> <td>11</td> <td></td> </tr> <tr> <td>7</td> <td></td> </tr> <tr> <td>14</td> <td></td> </tr> </tbody> </table>	After		5		9		11		7		14		5
After														
5														
9														
11														
7														
14														
6.	<p>State which object is heavier than, lighter than or as heavy as.</p> <div data-bbox="279 1321 494 1512">  </div> <p>The basketball is _____ the flower.</p> <div data-bbox="271 1512 542 1713">  </div> <p>The mouse is _____ the elephant.</p>													

	<div></div> <div>The apple is _____ the orange.</div>	3															
7.	<div>Match the shape with its name.</div> <table><tr><th>Name</th><th>Shape</th></tr><tr><td>Square</td><td></td></tr><tr><td>Rectangle</td><td></td></tr><tr><td>Triangle</td><td></td></tr></table>	Name	Shape	Square		Rectangle		Triangle		3							
Name	Shape																
Square																	
Rectangle																	
Triangle																	
8.	<div>Write in the missing numbers.</div> <table><tr><th>Before</th><th>Between</th><th>After</th></tr><tr><td></td><td>7</td><td></td></tr><tr><td></td><td>11</td><td></td></tr><tr><td></td><td>13</td><td></td></tr><tr><td></td><td>18</td><td></td></tr></table>	Before	Between	After		7			11			13			18		4
Before	Between	After															
	7																
	11																
	13																
	18																

	Total	25
--	-------	----