

Name \_\_\_\_\_

Date \_\_\_\_\_

## Copy of Capacity Quiz

Answer the following questions.

**1. Would you use milliliters or liters to find how much this trash can hold?**

*points: 1*



- ☐ Milliliters
- ☐ Liters

**2. Would you use milliliters or liters to find how much this spoon holds?**

*points: 1*



- ☐ Milliliters
- ☐ Liters

**3. Would you use milliliters or liters to find how much this small water cup holds?** *points: 1*



- ☐ Milliliters
- ☐ Liters

**4. Would you use milliliters or liters to find how much this bathtub holds?**

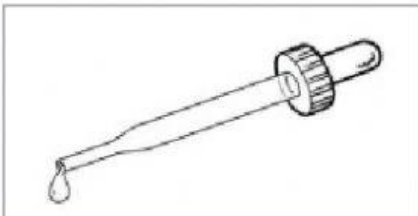
*points: 1*



- ☐ Milliliters
- ☐ Liters


**5. Would you use milliliters or liters to find how much this eye dropper holds?**

*points: 1*



- ☐ Milliliters
- ☐ Liters


**6. Would you use milliliters or liters to find how much this small juice box holds?** *points: 1*



- ☐ Milliliters
- ☐ Liters

**7. Would you use milliliters or liters to find how much this big cauldron holds?**

*points: 1*



- ☐ Milliliters
- ☐ Liters

**8. Would you use milliliters or liters to find how much this soda can hold?**

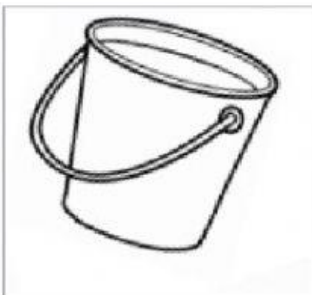
*points: 1*



- ☐ Milliliters
- ☐ Liters

**9. Would you use milliliters or liters to find how much this big bucket holds?**

*points: 1*



- ☐ Milliliters
- ☐ Liters

**10. Would you use milliliters or liters to find how much this barrel holds?**

*points: 1*



- ☐ Milliliters
- ☐ Liters